




#1

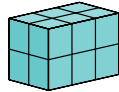
If you look at this object from the left, which image will you see?



Show your work

#2



If you look at this object from the left, which image will you see?



Show your work

#3

If you look at this object from the top, which image will you see?


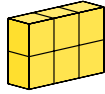


Show your work



#4


If you look at this object from the top, which image will you see?



Show your work

#5


If you look at this object from the left, which image will you see?



Show your work

#6

If you look at this object from the right, which image will you see?




Show your work



#7


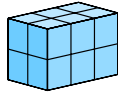
If you look at this object from the top, which image will you see?



Show your work

#8



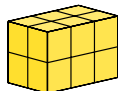
If you look at this object from the top, which image will you see?



Show your work

#9

If you look at this object from the left, which image will you see?


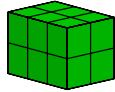


Show your work



#10


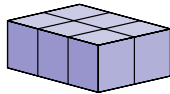
If you look at this object from the right, which image will you see?



Show your work

#11

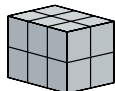
If you look at this object from the top, which image will you see?



Show your work

#12

If you look at this object from the right, which image will you see?



Show your work

Question	Answer
#1	choice 2
#2	choice 2
#3	choice 1
#4	choice 2
#5	choice 2
#6	choice 2
#7	choice 1
#8	choice 1
#9	choice 1
#10	choice 1
#11	choice 1
#12	choice 2