

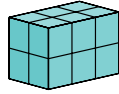




#1

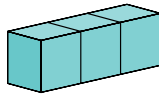
If you look at this object from the left, which image will you see?



Show your work

#2


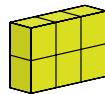
If you look at this object from the right, which image will you see?



Show your work

#3

If you look at this object from the right, which image will you see?



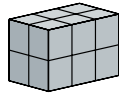


Show your work



#4

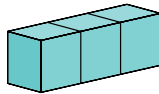
If you look at this object from the left, which image will you see?



Show your work

#5


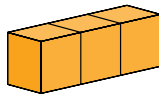
If you look at this object from the left, which image will you see?



Show your work


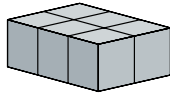
#6

If you look at this object from the top, which image will you see?




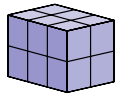
Show your work

#7 If you look at this object from the right, which image will you see?




Show your work

#8 If you look at this object from the top, which image will you see?



Show your work

#9 If you look at this object from the left, which image will you see?

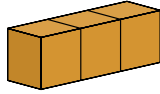


Show your work



#10

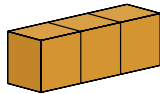
If you look at this object from the top, which image will you see?



Show your work

#11

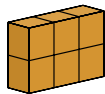
If you look at this object from the right, which image will you see?



Show your work

#12

If you look at this object from the top, which image will you see?



Show your work

Question	Answer
#1	choice 2
#2	choice 1
#3	choice 1
#4	choice 1
#5	choice 2
#6	choice 1
#7	choice 1
#8	choice 1
#9	choice 2
#10	choice 2
#11	choice 2
#12	choice 2