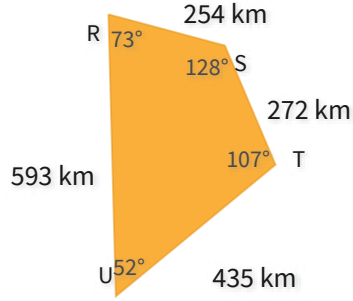
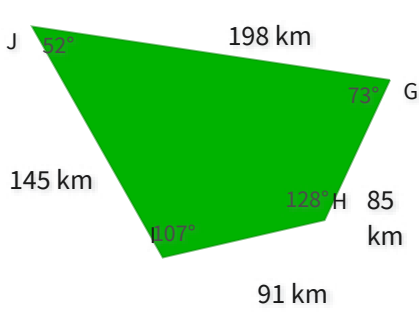


#1

Are these shapes congruent?



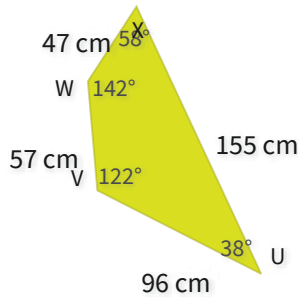
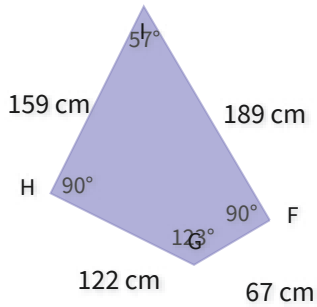
Yes

No

Show your work

#2

Are these shapes similar?



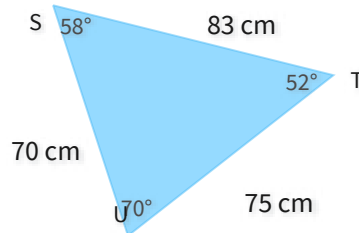
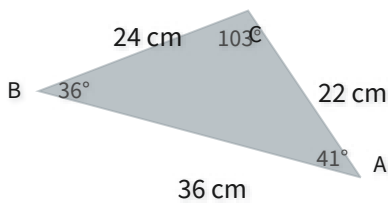
No

Yes

Show your work

#3

Are these shapes similar?



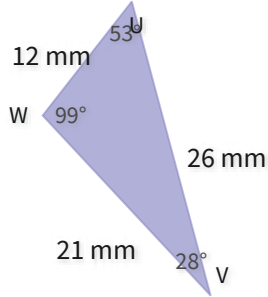
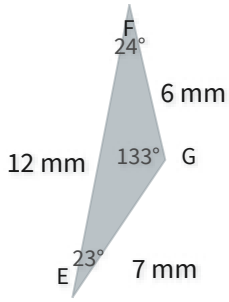
No

Yes

Show your work

#4

Are these shapes similar?



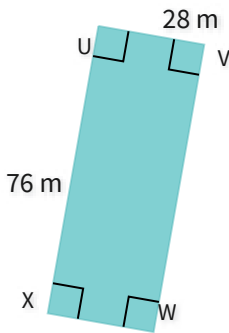
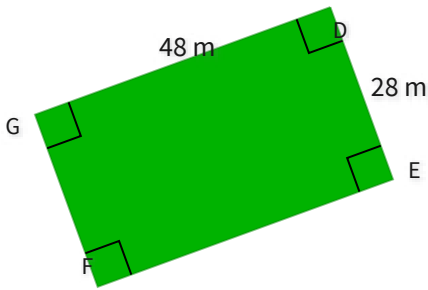
Yes

No

Show your work

#5

Are these shapes congruent?



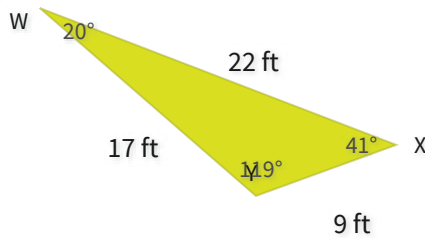
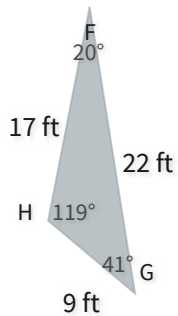
No

Yes

Show your work

#6

Are these shapes congruent?



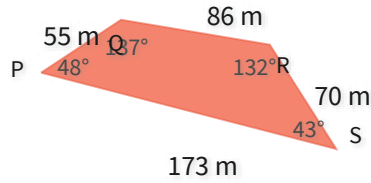
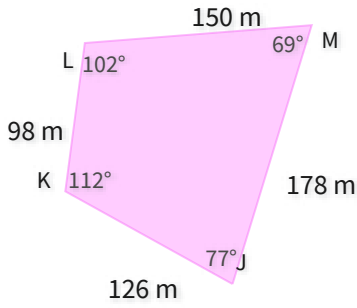
No

Yes

Show your work

#7

Are these shapes congruent?



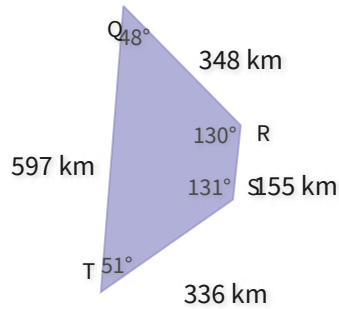
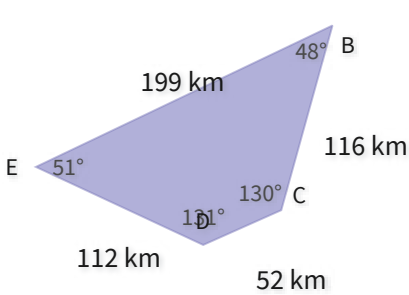
Yes

No

Show your work

#8

Are these shapes similar?



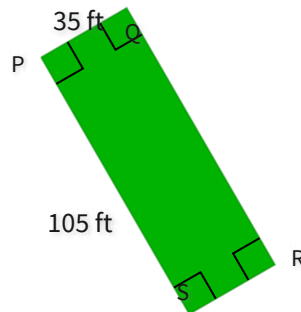
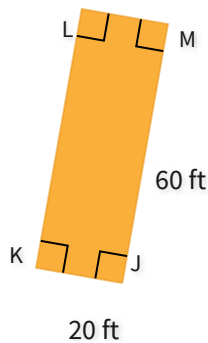
Yes

No

Show your work

#9

Are these shapes congruent?



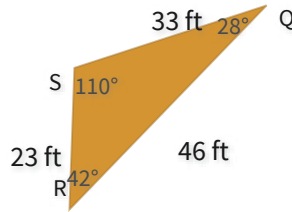
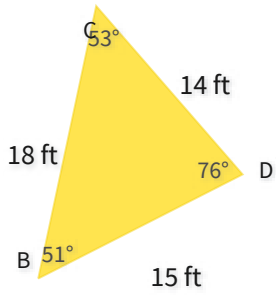
Yes

No

Show your work

#10

Are these shapes congruent?



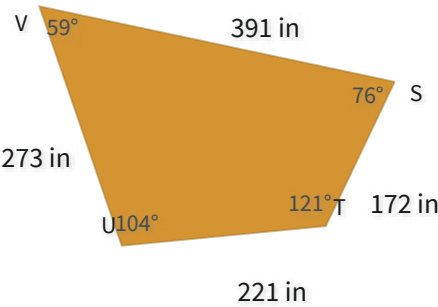
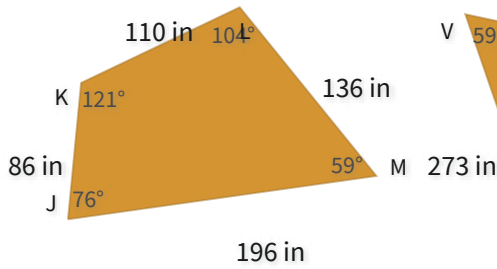
No

Yes

Show your work

#11

Are these shapes similar?



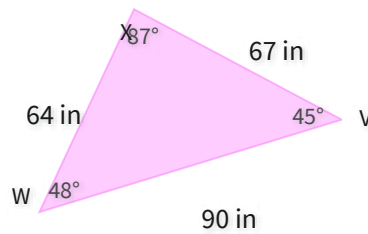
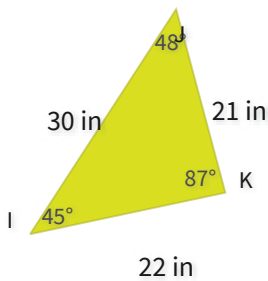
Yes

No

Show your work

#12

Are these shapes similar?



No

Yes

Show your work

| Question | Answer   |
|----------|----------|
| #1       | choice 2 |
| #2       | choice 1 |
| #3       | choice 1 |
| #4       | choice 2 |
| #5       | choice 1 |
| #6       | choice 2 |
| #7       | choice 2 |
| #8       | choice 1 |
| #9       | choice 2 |
| #10      | choice 1 |
| #11      | choice 1 |
| #12      | choice 2 |