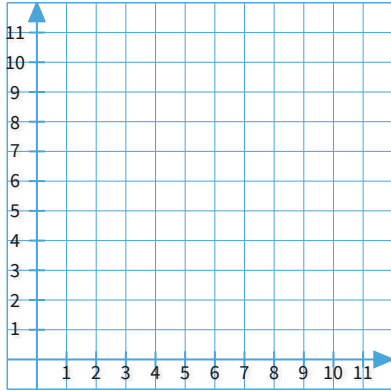




#1

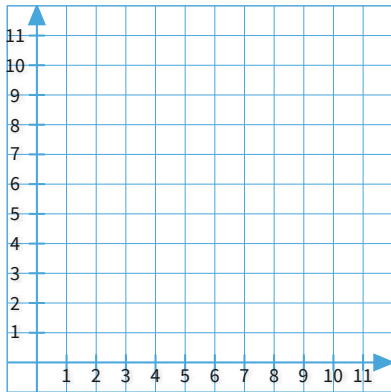
Graph this function: $y=3x$. Click to select points on the graph.



Show your work

#2

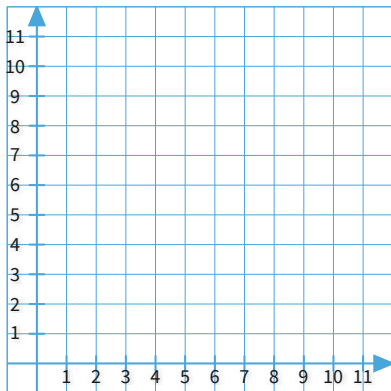
Graph this function: $y=5x$. Click to select points on the graph.



Show your work

#3

Graph this function: $y=9x$. Click to select points on the graph.

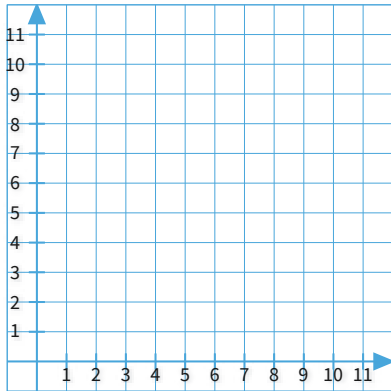


Show your work



#4

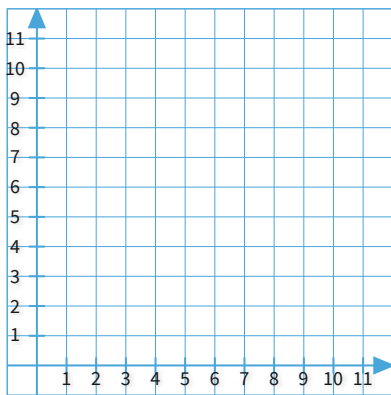
Graph this function: $y=2x$. Click to select points on the graph.



Show your work

#5

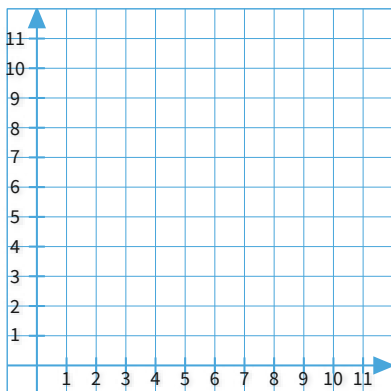
Graph this function: $y=2x$. Click to select points on the graph.



Show your work

#6

Graph this function: $y=8x$. Click to select points on the graph.

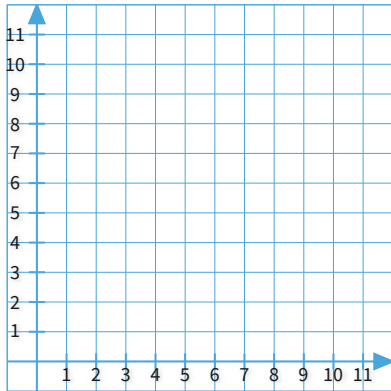


Show your work



#7

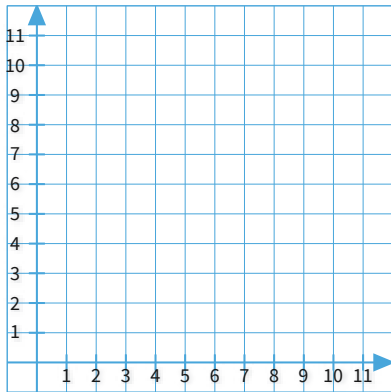
Graph this function: $y=3x$. Click to select points on the graph.



Show your work

#8

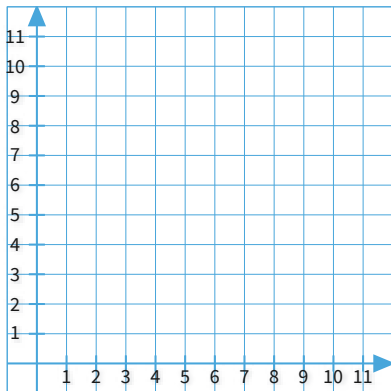
Graph this function: $y=4x$. Click to select points on the graph.



Show your work

#9

Graph this function: $y=5x$. Click to select points on the graph.

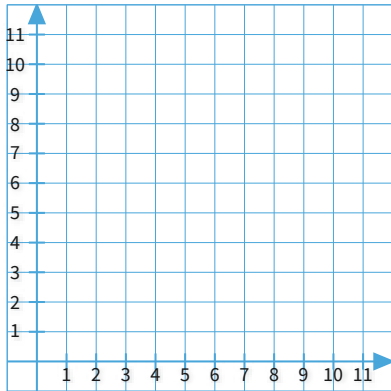


Show your work



#10

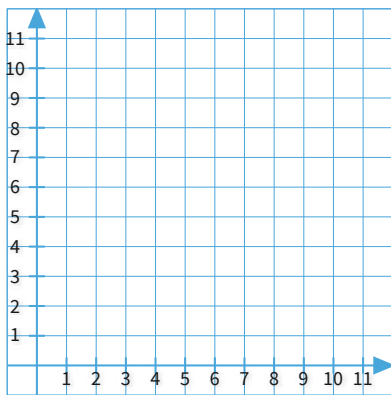
Graph this function: $y=3x$. Click to select points on the graph.



Show your work

#11

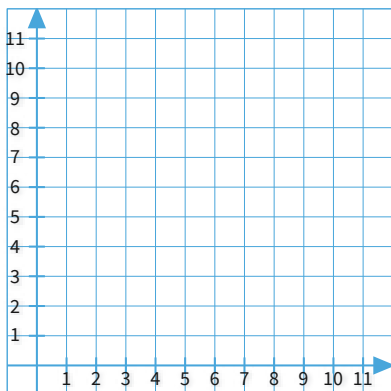
Graph this function: $y=5x$. Click to select points on the graph.



Show your work

#12

Graph this function: $y=9x$. Click to select points on the graph.



Show your work

Question	Answer
#1	[object Object]
#2	[object Object]
#3	[object Object]
#4	[object Object]
#5	[object Object]
#6	[object Object]
#7	[object Object]
#8	[object Object]
#9	[object Object]
#10	[object Object]
#11	[object Object]
#12	[object Object]