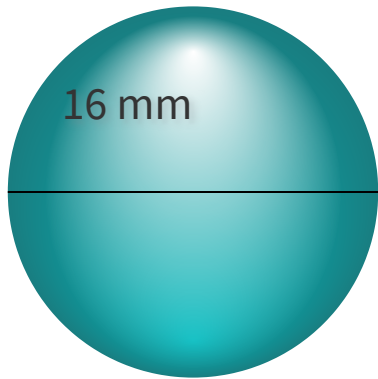


#1

What is the surface area? Use  $\pi=3.14$ , and round your answer to the nearest hundredth.

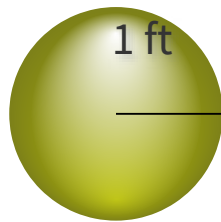


square mm

Show your work

#2

What is the volume? Use  $\pi=3.14$ , and round your answer to the nearest hundredth.

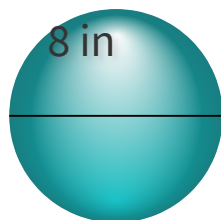


- 4.19 cubic ft
- 3.64 cubic ft
- 2.94 cubic ft
- 3.18 cubic ft

Show your work

#3

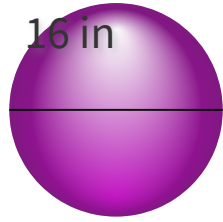
What is the volume? Use  $\pi=3.14$ , and round your answer to the nearest hundredth.



- 255.94 cubic in
- 345.52 cubic in
- 282.24 cubic in
- 267.95 cubic in

Show your work

#4 What is the surface area? Use  $\pi=3.14$ , and round your answer to the nearest hundredth.



- 803.84 square in
- 733.34 square in
- 816.91 square in
- 922.72 square in

Show your work

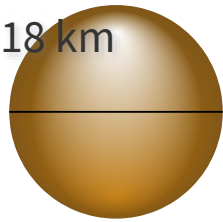
#5 What is the surface area? Use  $\pi=3.14$ , and round your answer to the nearest hundredth.



- 136.17 square km
- 106.97 square km
- 142.75 square km
- 113.04 square km

Show your work

#6 What is the surface area? Use  $\pi=3.14$ , and round your answer to the nearest hundredth.

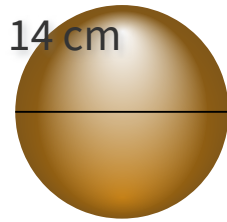


- 1218.61 square km
- 949.21 square km
- 1017.36 square km
- 722.25 square km

Show your work

#7

What is the volume? Use  $\pi=3.14$ , and round your answer to the nearest hundredth.

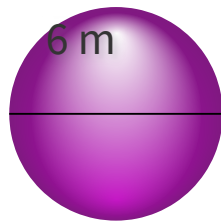


- 1514.25 cubic cm
- 1102.38 cubic cm
- 1259.20 cubic cm
- 1436.03 cubic cm

Show your work

#8

What is the volume? Use  $\pi=3.14$ , and round your answer to the nearest hundredth.

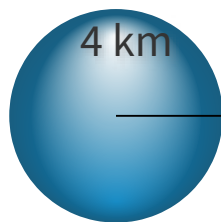


- 120.52 cubic m
- 113.04 cubic m
- 121.77 cubic m
- 105.10 cubic m

Show your work

#9

What is the surface area? Use  $\pi=3.14$ , and round your answer to the nearest hundredth.

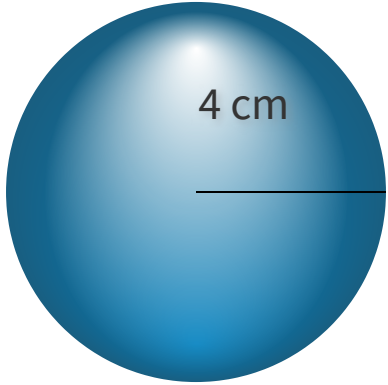


- 200.96 square km
- 149.06 square km
- 247.72 square km
- 193.02 square km

Show your work

#10

What is the surface area? Use  $\pi=3.14$ , and round your answer to the nearest hundredth.

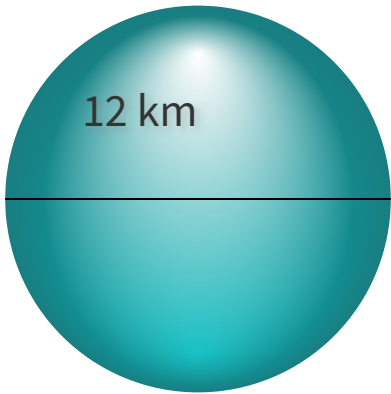


square cm

Show your work

#11

What is the volume? Use  $\pi=3.14$ , and round your answer to the nearest hundredth.

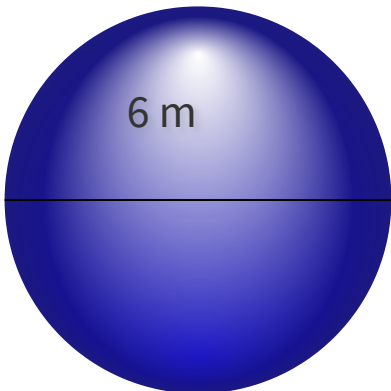


cubic km

Show your work

#12

What is the surface area? Use  $\pi=3.14$ , and round your answer to the nearest hundredth.



square m

Show your work

Question	Answer
#1	803.84
#2	choice 1
#3	choice 4
#4	choice 1
#5	choice 4
#6	choice 3
#7	choice 4
#8	choice 2
#9	choice 1
#10	200.96
#11	904.32
#12	113.04