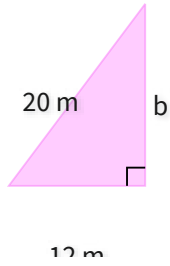


#1

What is the perimeter?

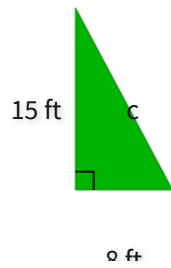


- 48 m
- 37 m
- 46 m
- 35 m

Show your work

#2

What is the perimeter?

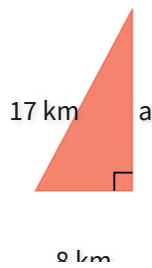


- 40 ft
- 51 ft
- 36 ft
- 32 ft

Show your work

#3

What is the perimeter?

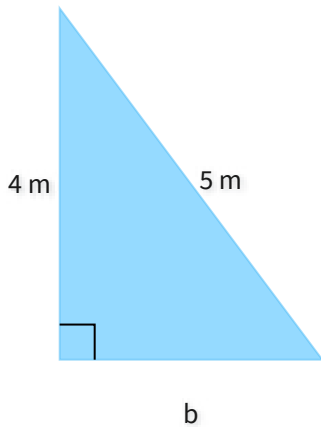


- 45 km
- 41 km
- 44 km
- 40 km

Show your work

#4

What is the perimeter?

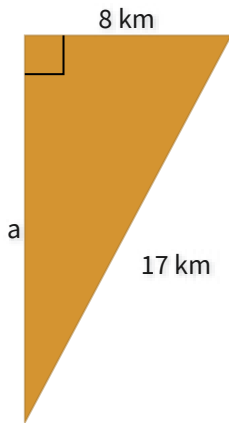


m

Show your work

#5

What is the perimeter?

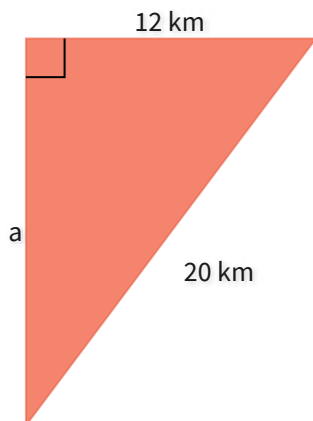


km

Show your work

#6

What is the perimeter?

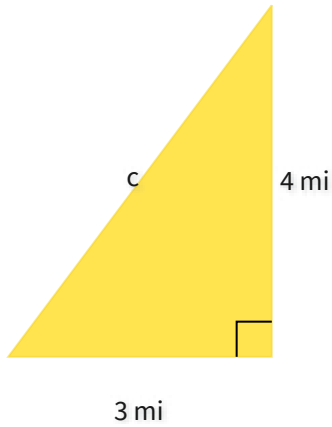


km

Show your work

#7

What is the perimeter?

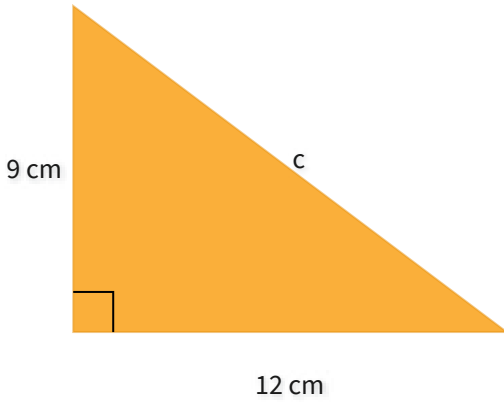


mi

Show your work

#8

What is the perimeter?

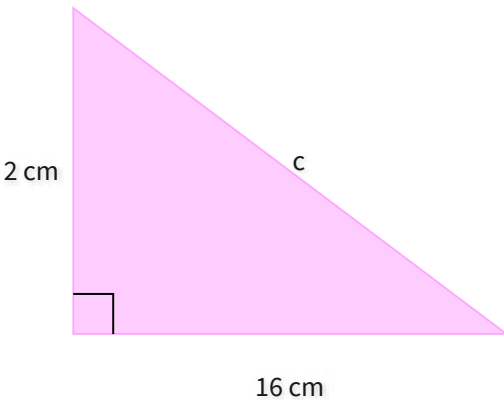


cm

Show your work

#9

What is the perimeter?

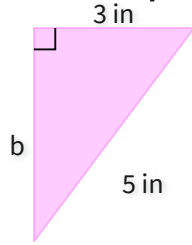


cm

Show your work

#10

What is the perimeter?

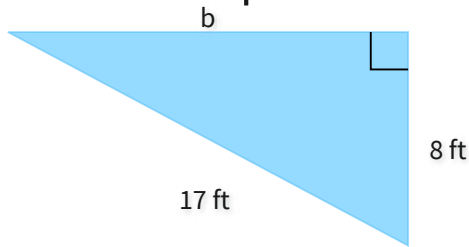


- 12 in
- 11 in
- 13 in
- 9 in

Show your work

#11

What is the perimeter?

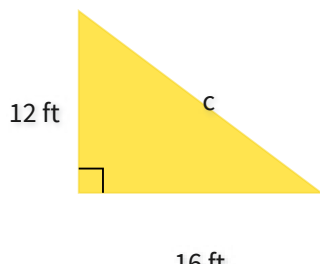


- 40 ft
- 38 ft
- 45 ft
- 33 ft

Show your work

#12

What is the perimeter?



- 44 ft
- 48 ft
- 37 ft
- 43 ft

Show your work

Question	Answer
#1	choice 1
#2	choice 1
#3	choice 4
#4	12
#5	40
#6	48
#7	12
#8	36
#9	48
#10	choice 1
#11	choice 1
#12	choice 2