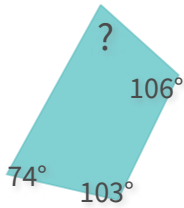


#1

What is the measure of the missing angle?

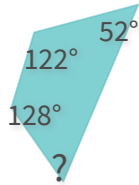


- $77^\circ$
- $53^\circ$
- $86^\circ$
- $73^\circ$

Show your work

#2

What is the measure of the missing angle?

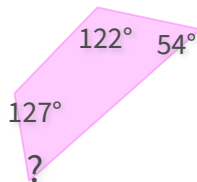


- $72^\circ$
- $59^\circ$
- $61^\circ$
- $58^\circ$

Show your work

#3

What is the measure of the missing angle?

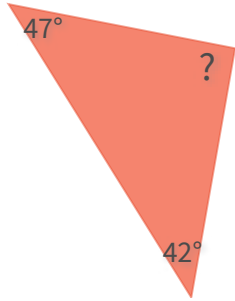


- $75^\circ$
- $63^\circ$
- $39^\circ$
- $57^\circ$

Show your work

#4

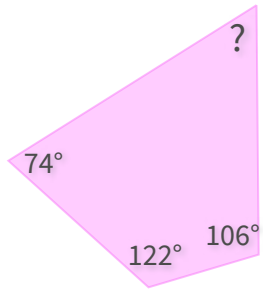
What is the measure of the missing angle?




Show your work

#5


What is the measure of the missing angle?




Show your work

#6

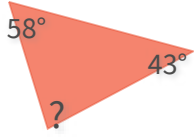
What is the measure of the missing angle?




Show your work

#7

What is the measure of the missing angle?



102°

94°


58°

79°

Show your work

#8

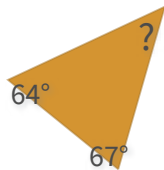
What is the measure of the missing angle?



Show your work

#9

What is the measure of the missing angle?



58°

55°

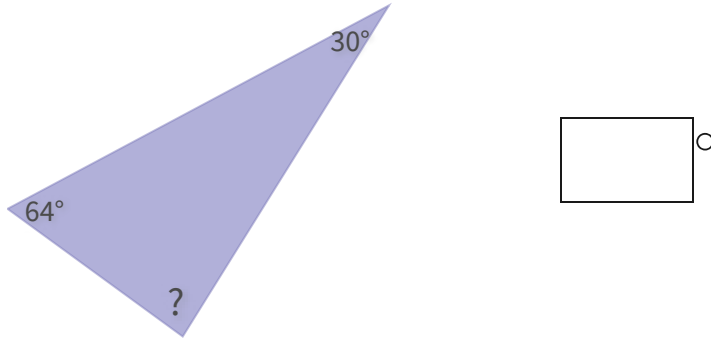
49°

46°

Show your work

#10

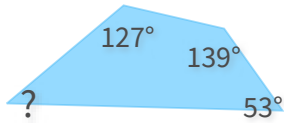
What is the measure of the missing angle?



Show your work

#11

What is the measure of the missing angle?



43°

41°

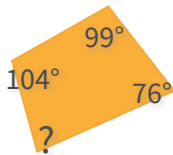
42°

44°

Show your work

#12

What is the measure of the missing angle?



95°

81°

57°

101°

Show your work

Question	Answer
#1	choice 1
#2	choice 4
#3	choice 4
#4	91
#5	58
#6	72
#7	choice 4
#8	125
#9	choice 3
#10	86
#11	choice 2
#12	choice 2