

#1 What is the sum of the angle measures in this shape?



630°


360°

450°

180°

Show your work

#2 What is the sum of the angle measures in this shape?



900°


450°

720°

810°

Show your work

#3 What is the sum of the angle measures in this shape?



Show your work

#4 What is the sum of the angle measures in this shape?



630°


360°

180°

540°

Show your work

#5 What is the sum of the angle measures in this shape?



Show your work

#6 What is the sum of the angle measures in this shape?




Show your work



#7

What is the sum of the angle measures in this shape?



Show your work

#8

What is the sum of the angle measures in this shape?



180°

630°


450°

360°

Show your work

#9

What is the sum of the angle measures in this shape?




Show your work



#10


What is the sum of the angle measures in this shape?



Show your work

#11

What is the sum of the angle measures in this shape?



Show your work

#12

What is the sum of the angle measures in this shape?



540°

630°

720°

450°

Show your work

Question	Answer
#1	choice 2
#2	choice 3
#3	540
#4	choice 2
#5	360
#6	180
#7	360
#8	choice 4
#9	540
#10	720
#11	540
#12	choice 3