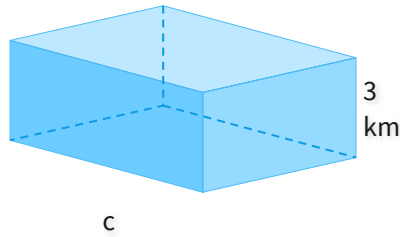
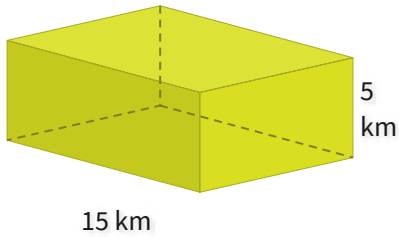


#1

The figures below are similar. What is c ?

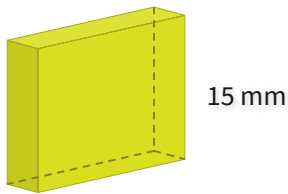
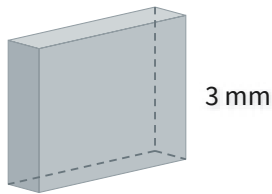


kilometers

Show your work

#2

The figures below are similar. What is b ?



4 millimeters

3 millimeters

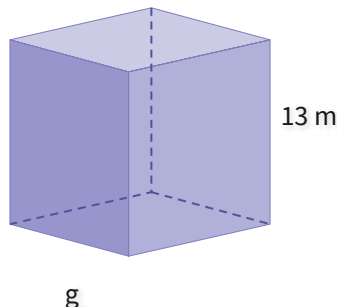
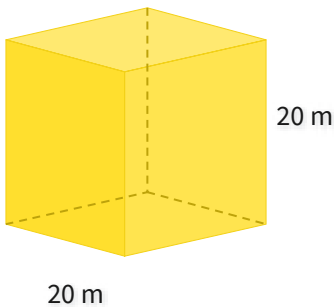
5 millimeters

8 millimeters

Show your work

#3

The figures below are similar. What is g ?

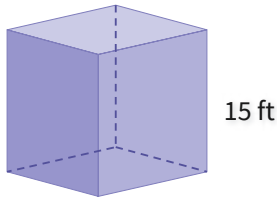


meters

Show your work

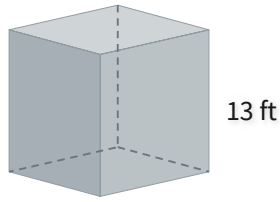
#4

The figures below are similar. What is v ?



v

- 18 feet
- 17 feet



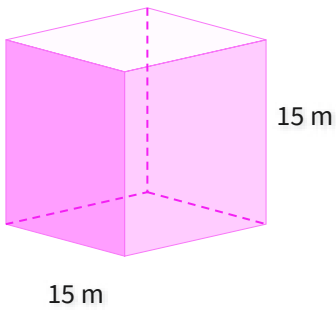
13 ft

- 11 feet
- 15 feet

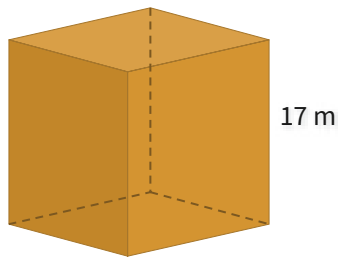
Show your work

#5

The figures below are similar. What is u ?



15 m



17 m

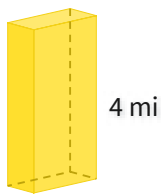
u

meters

Show your work

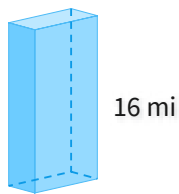
#6

The figures below are similar. What is c ?



c

- 1 miles
- 2 miles



16 mi

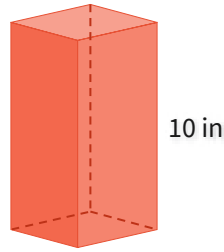
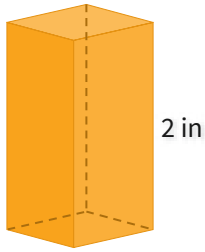
4 mi

- 4 miles
- 3 miles

Show your work

#7

The figures below are similar. What is e ?



e

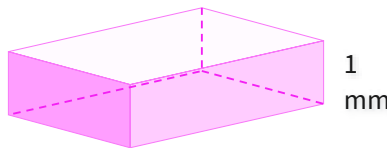
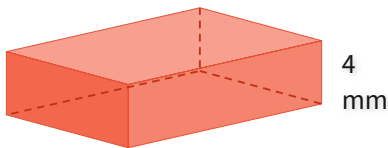
5 in

inches

Show your work

#8

The figures below are similar. What is f ?



f

3 mm

16 millimeters

15 millimeters

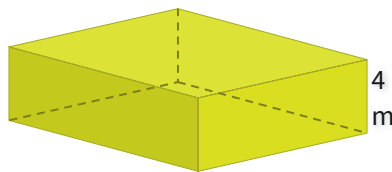
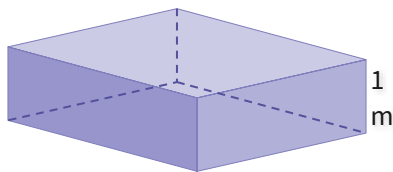
9 millimeters

12 millimeters

Show your work

#9

The figures below are similar. What is z ?



z

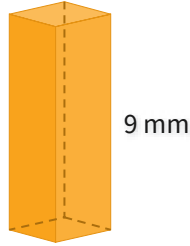
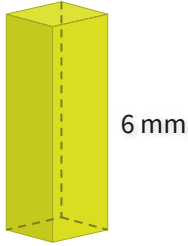
16 m

meters

Show your work

#10

The figures below are similar. What is p ?

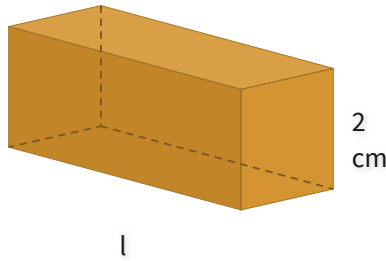
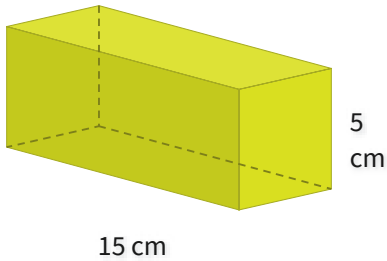


millimeters

Show your work

#11

The figures below are similar. What is l ?

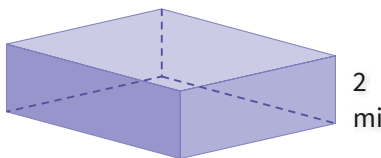
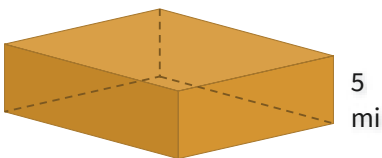


- 6 centimeters
- 7 centimeters
- 5 centimeters
- 9 centimeters

Show your work

#12

The figures below are similar. What is k ?



- 17 miles
- 20 miles
- 19 miles
- 16 miles

Show your work

Question	Answer
#1	9
#2	choice 3
#3	13
#4	choice 4
#5	17
#6	choice 1
#7	1
#8	choice 4
#9	4
#10	2
#11	choice 1
#12	choice 3