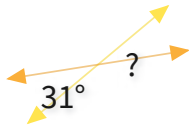




#1

What is the value of a missing angle?



32°

31°

39°

35°

Show your work

#2

What is the value of a missing angle?



66°

72°

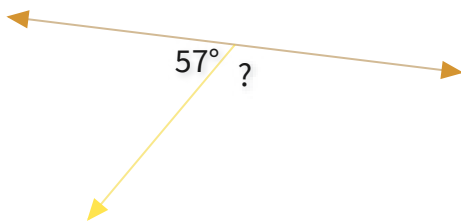
50°

56°

Show your work

#3

What is the value of a missing angle?



$^\circ$

Show your work



#4

What is the value of a missing angle?



118°

150°

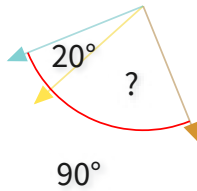
151°

85°

Show your work

#5

What is the value of a missing angle?



70°

66°

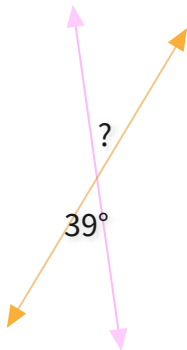
85°

57°

Show your work

#6

What is the value of a missing angle?

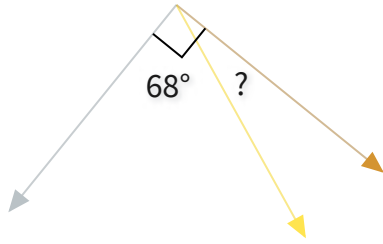


Show your work



#7

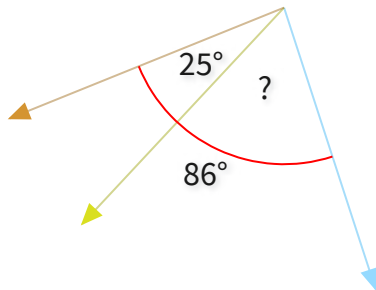
What is the value of a missing angle?

°

Show your work

#8

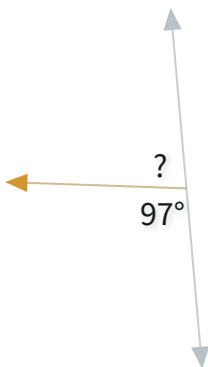
What is the value of a missing angle?

°

Show your work

#9

What is the value of a missing angle?

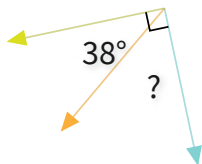
°

Show your work



#10

What is the value of a missing angle?



44°

52°

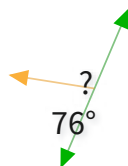
41°

61°

Show your work

#11

What is the value of a missing angle?



123°

136°

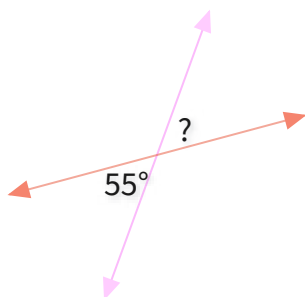
104°

85°

Show your work

#12

What is the value of a missing angle?



$^\circ$

Show your work

Question	Answer
#1	choice 2
#2	choice 4
#3	123
#4	choice 1
#5	choice 1
#6	39
#7	22
#8	61
#9	83
#10	choice 2
#11	choice 3
#12	55