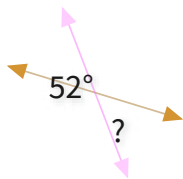




#1

What is the value of a missing angle?



63°

52°

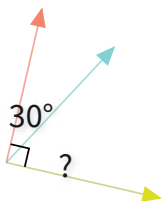
47°

54°

Show your work

#2

What is the value of a missing angle?



66°

54°

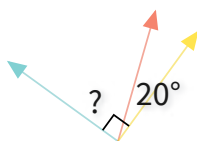
71°

60°

Show your work

#3

What is the value of a missing angle?



70°

90°

86°

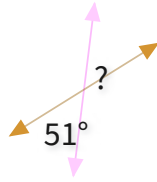
55°

Show your work



#4

What is the value of a missing angle?



62°

51°

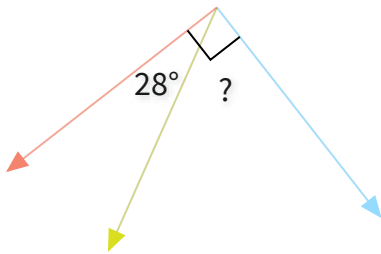
36°

52°

Show your work

#5

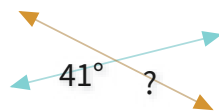
What is the value of a missing angle?

 °

Show your work

#6

What is the value of a missing angle?



49°

41°

42°

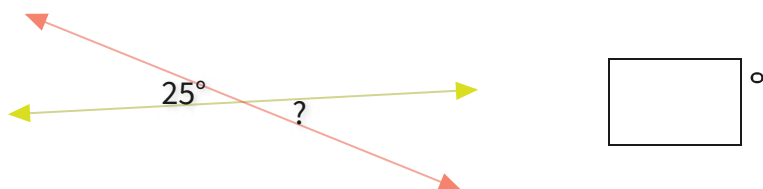
48°

Show your work



#7

What is the value of a missing angle?



Show your work

#8

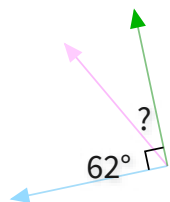
What is the value of a missing angle?



Show your work

#9

What is the value of a missing angle?



29°

33°

28°

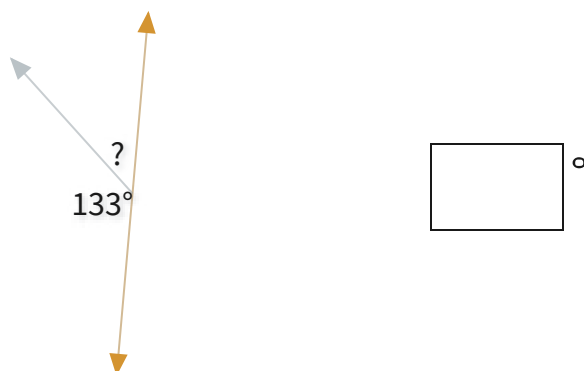
25°

Show your work



#10

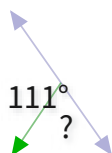
What is the value of a missing angle?



Show your work

#11

What is the value of a missing angle?



69°

86°

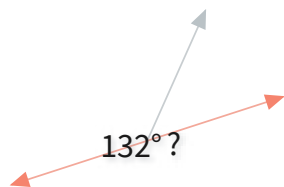
74°

53°

Show your work

#12

What is the value of a missing angle?



48°

33°

62°

57°

Show your work

Question	Answer
#1	choice 2
#2	choice 4
#3	choice 1
#4	choice 2
#5	62
#6	choice 2
#7	25
#8	135
#9	choice 3
#10	47
#11	choice 1
#12	choice 1