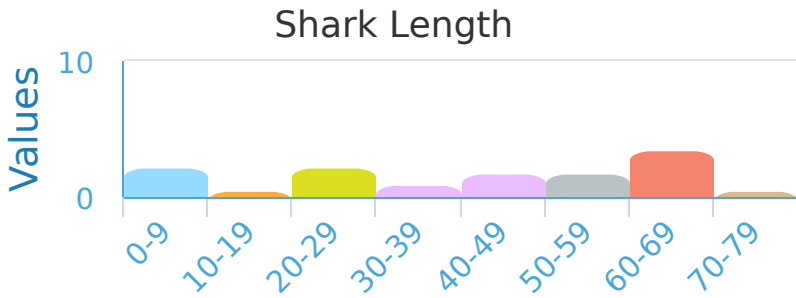


#1

Using the chart below find how many sharks were recorded to be between 0 and 9 feet long.

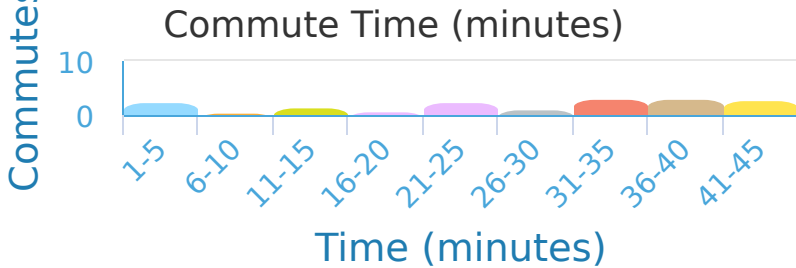


sharks

Show your work

#2

A business magazine surveyed its readers about their commute times. How many commuters did they survey?

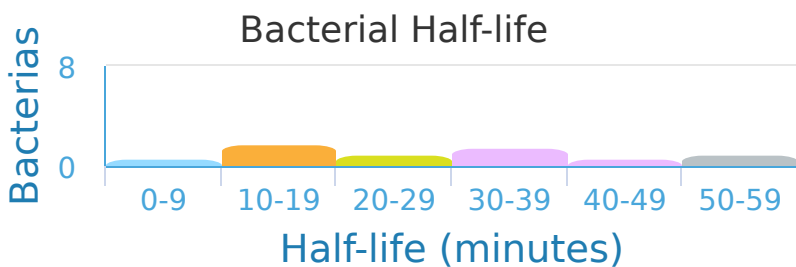


- 42 commutes
- 58 commutes
- 50 commutes
- 38 commutes

Show your work

#3

A grad student makes the table below while recording bacterial half-lives. What is the most common half-life time?

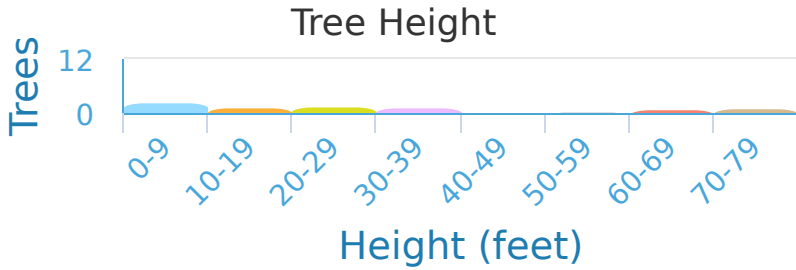


- 0-9
- 30-39
- 50-59
- 10-19

Show your work

#4

Isabelle wanders her neighborhood and creates the following table.  
How many trees are between 70 and 79 feet tall?

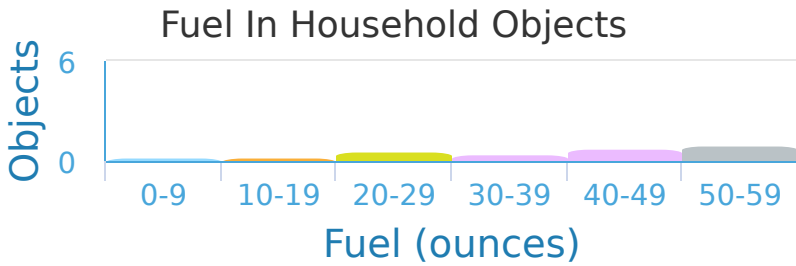


- 3 trees
- 4 trees
- 5 trees
- 1 trees

Show your work

#5

Elizabeth is planning for the apocalypse and is assessing how much fuel various objects in her house contain. If she has measured fuel in ounces, what is the most common amount of fuel an object contains?

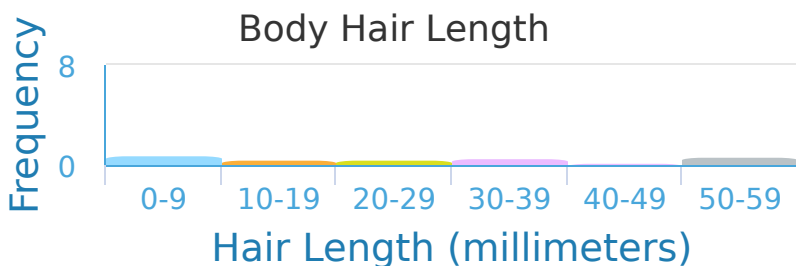


- 20–29
- 30–39
- 40–49
- 50–59

Show your work

#6

A researched made the table below to show the frequency of different lengths of body hair. What is the most common length of body hair among this sample?

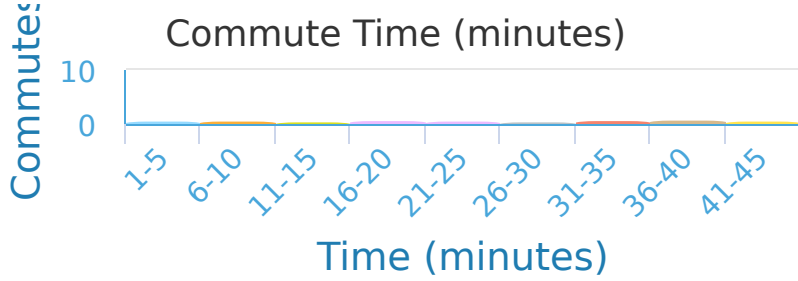


- 0–9
- 10–19
- 20–29
- 50–59

Show your work

#7

A business magazine surveyed its readers about their commute times. How many commuters did they survey?



- 54 commutes
- 69 commutes
- 42 commutes
- 70 commutes

Show your work

#8

In a video game gold is rewarded for killing monsters. How many monsters are worth between 0 and 9?

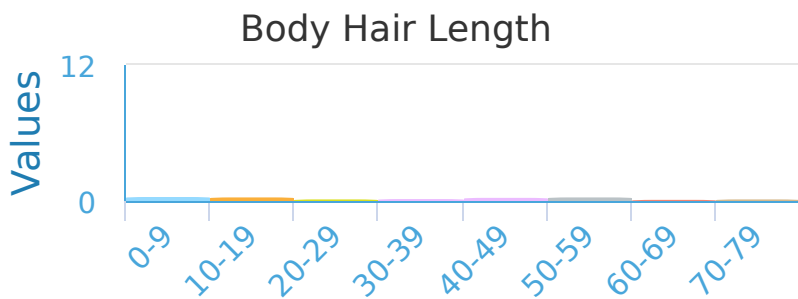


- 8
- 3
- 6
- 5

Show your work

#9

A researched made the table below to show the frequency of different lengths of body hair. How many people have body hair between 70 and 79 millimeters long?



people

Show your work

#10

A researched made the table below to show the frequency of different lengths of body hair. What is the most common length of body hair among this sample?

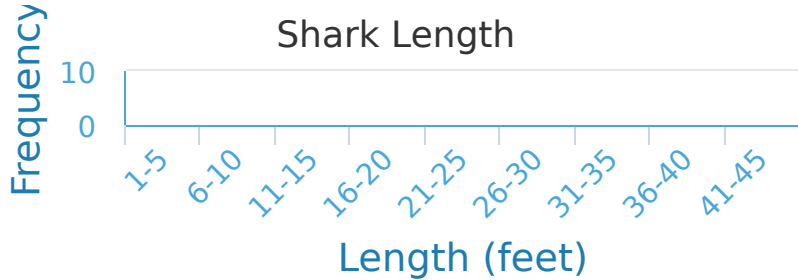


- 0–9
- 10–19
- 30–39
- 50–59

Show your work

#11

Using the chart below find how many sharks were measured and recorded.

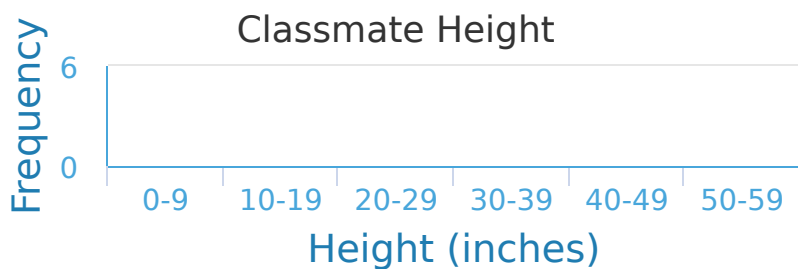


- 51
- 45
- 57
- 49

Show your work

#12

As part of a project Landon measures the height of everyone in his class. What was the most common height?



- 0–9
- 10–19
- 30–39
- 40–49
- 50–59

Show your work

Question	Answer
#1	5
#2	choice 3
#3	choice 4
#4	choice 3
#5	choice 4
#6	choice 1
#7	choice 1
#8	choice 4
#9	4
#10	choice 2
#11	choice 3
#12	choice 4