

#1

How many bananas are there? Count by tens.




Total:

Show your work

#2

How many oranges are there? Count by tens.



Total:

Show your work

#3

How many oranges are there? Count by tens.



10

30


40

50

Show your work

#4

How many eggs are there? Count by tens.




Total:

Show your work

#5

How many blocks are there? Count by tens.



20

40


30

10

Show your work

#6

How many eggs are there? Count by tens.



Total:

Show your work

#7

How many bananas are there? Count by tens.



Total:

Show your work

#8

How many oranges are there? Count by tens.



30

20


40

50

Show your work

#9

How many blocks are there? Count by tens.



20

40


30

10

Show your work

#10

How many eggs are there? Count by tens.



Total:

Show your work

#11

How many bananas are there? Count by tens.



20

10


50

40

Show your work

#12

How many blocks are there? Count by tens.



30

20

10

40

Show your work

Question	Answer
#1	10
#2	30
#3	choice 1
#4	10
#5	choice 3
#6	20
#7	20
#8	choice 1
#9	choice 3
#10	20
#11	choice 1
#12	choice 2