


#1


How many eggs are there? Count by tens.

 40 50 30 20

Show your work

#2

How many eggs are there? Count by tens.




Total:

Show your work

#3

How many eggs are there? Count by tens.



Total:

Show your work

#4

How many bananas are there? Count by tens.




Total:

Show your work

#5

How many oranges are there? Count by tens.



30

10


50

20

Show your work

#6

How many oranges are there? Count by tens.




Total:

Show your work

#7

How many eggs are there? Count by tens.




Total:

Show your work

#8

How many oranges are there? Count by tens.



Total:

Show your work

#9

How many red apples are there? Count by tens.



Total:

Show your work

#10

How many red apples are there? Count by tens.




Total:

Show your work

#11

How many bananas are there? Count by tens.




Total:

Show your work

#12

How many red apples are there? Count by tens.



Total:

Show your work

Question	Answer
#1	choice 4
#2	10
#3	30
#4	20
#5	choice 4
#6	20
#7	10
#8	30
#9	10
#10	30
#11	30
#12	20