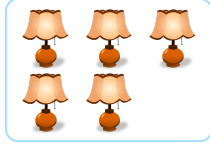




#1 Count the lamps. Now choose the group that shows how you count up by 1.



Show your work

#2 Count the dolls. Now choose the group that shows how you count down by 1.





Show your work

#3 Count the bananas. Now choose the group that shows how you count down by 1.



Show your work

#4 Count the flowers. Now choose the group that shows how you count up by 1.




Show your work

#5 Count the pitchers. Now choose the group that shows how you count down by 1.




Show your work

#6 Count the sports cars. Now choose the group that shows how you count down by 1.



Show your work

#7 Count the tigers. Now choose the group that shows how you count up by 1.




Show your work

#8 Count the skateboards. Now choose the group that shows how you count up by 1.



Show your work

#9 Count the batteries. Now choose the group that shows how you count down by 1.



Show your work

#10 Count the pitchers. Now choose the group that shows how you count down by 1.




Show your work

#11 Count the compact discs. Now choose the group that shows how you count up by 1.



Show your work

#12 Count the skateboards. Now choose the group that shows how you count up by 1.



Show your work

Question	Answer
#1	choice 1
#2	choice 2
#3	choice 2
#4	choice 1
#5	choice 1
#6	choice 1
#7	choice 1
#8	choice 2
#9	choice 1
#10	choice 2
#11	choice 2
#12	choice 2