


#1 Count the tigers. Now choose the group that shows how you count down by 1.





Show your work

#2 Count the whistles. Now choose the group that shows how you count up by 1.




Show your work

#3 Count the flowers. Now choose the group that shows how you count down by 1.



Show your work

#4 Count the oranges. Now choose the group that shows how you count down by 1.




Show your work

#5 Count the fire trucks. Now choose the group that shows how you count up by 1.



Show your work

#6 Count the whistles. Now choose the group that shows how you count down by 1.





Show your work

#7 Count the clovers. Now choose the group that shows how you count down by 1.



Show your work

#8 Count the trains. Now choose the group that shows how you count down by 1.





Show your work

#9 Count the treasure chests. Now choose the group that shows how you count up by 1.





Show your work

#10 Count the flowers. Now choose the group that shows how you count up by 1.



Show your work

#11 Count the flowers. Now choose the group that shows how you count up by 1.



Show your work

#12 Count the clovers. Now choose the group that shows how you count down by 1.



Show your work

Question	Answer
#1	choice 2
#2	choice 2
#3	choice 1
#4	choice 2
#5	choice 2
#6	choice 1
#7	choice 2
#8	choice 2
#9	choice 1
#10	choice 1
#11	choice 1
#12	choice 1