


#1

Count the ladybugs.




- 9 4
- 6 3

Show your work

#2

Count the apples.



- 5 2
- 4 1

Show your work

#3

Count the umbrellas.



- 10 6
- 5 7

Show your work

#4

Count the chairs.

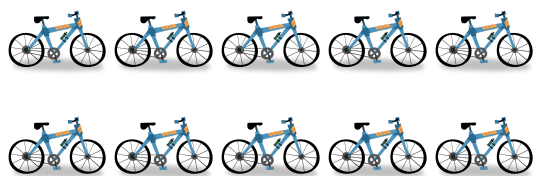


- 9 12
- 11 10

Show your work

#5

Count the bicycles.



- 11 8
- 7 10

Show your work

#6

Count the umbrellas.



- 1 2
- 3 4

Show your work

#7


Count the bicycles.

 5 6 11 8

Show your work

#8

Count the tigers.

 5 6 1 4

Show your work

#9


Count the ladybugs.

 9 4 6 3

Show your work

#10

Count the grapes.



- 4 5
 2 1

Show your work

#11

Count the boxes.



- 8 10
 6 9

Show your work

#12

Count the bananas.



- 1 2
 3 4

Show your work

Question	Answer
#1	6
#2	2
#3	7
#4	10
#5	10
#6	1
#7	8
#8	4
#9	6
#10	2
#11	8
#12	1