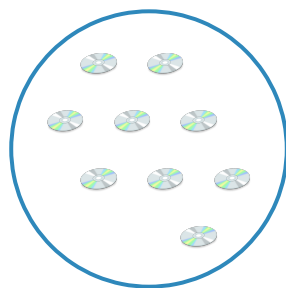
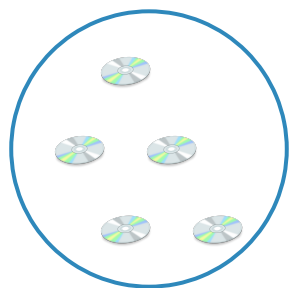


#1

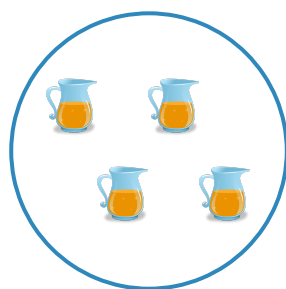
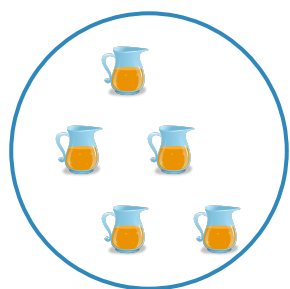
Which group has more compact discs?



Show your work

#2

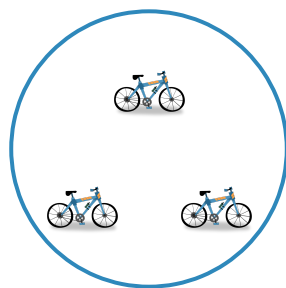
Which group has more pitchers?



Show your work

#3



Which group has more bicycles?



Show your work

#4



Which group has fewer pitchers?



Show your work

#5

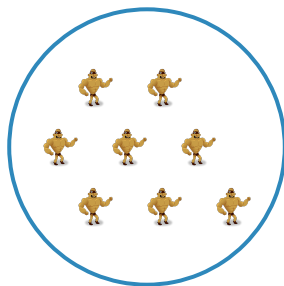

Which group has fewer batteries?



Show your work

#6

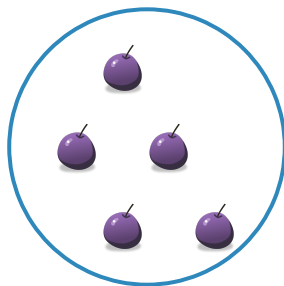
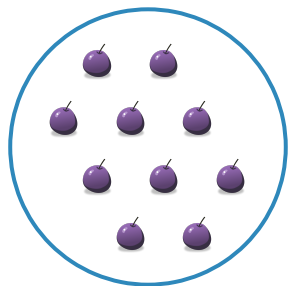
Which group has more action figures?



Show your work

#7



Which group has more grapes?



Show your work

#8



Which group has more oranges?



Show your work

#9



Which group has more whistles?



Show your work

#10


Which group has more batteries?



Show your work

#11

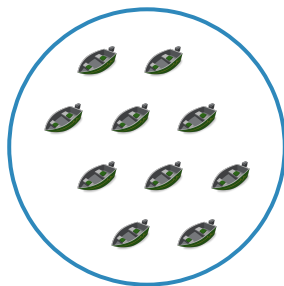
Which group has more boats?



Show your work

#12

Which group has more boats?



Show your work

Question	Answer
#1	choice 2
#2	choice 1
#3	choice 2
#4	choice 2
#5	choice 1
#6	choice 2
#7	choice 1
#8	choice 1
#9	choice 2
#10	choice 1
#11	choice 2
#12	choice 2