


#1

Which number is smaller?



Show your work

#2


Which number is larger?



Show your work

#3


Which number is smaller?



Show your work

#4


Which number is larger?



Show your work

#5


Which number is smaller?



Show your work

#6

Which number is smaller?



Show your work

#7



Which number is larger?



Show your work

#8



Which number is smaller?



Show your work

#9

Which number is larger?



Show your work

#10

Which number is smaller?



Show your work

#11

Which number is smaller?



Show your work

#12

Which number is larger?



Show your work

Question	Answer
#1	choice 2
#2	choice 1
#3	choice 1
#4	choice 1
#5	choice 1
#6	choice 2
#7	choice 2
#8	choice 2
#9	choice 1
#10	choice 1
#11	choice 2
#12	choice 1