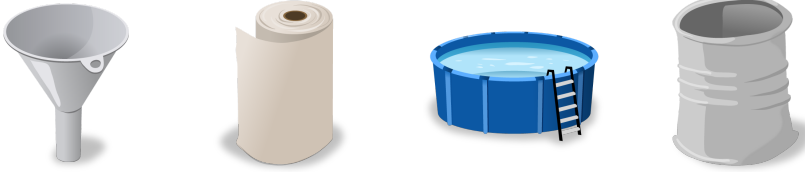


#1

Which of these objects are shaped like a cylinder?



Show your work

#2


Which of these objects are shaped like a sphere?



Show your work

#3

Which of these objects are shaped like a cone?



Show your work

#4

Which of these objects are shaped like a cone?



Show your work

#5

Which of these objects are shaped like a cone?



Show your work

#6

Which of these objects are shaped like a cylinder?



Show your work

#7

Which of these objects are shaped like a cone?








Show your work

#8

Which of these objects are shaped like a cylinder?







Show your work

#9

Which of these objects are shaped like a cone?







Show your work

#10

Which of these objects are shaped like a cube?







Show your work

#11

Which of these objects are shaped like a cone?








Show your work

#12

Which of these objects are shaped like a sphere?







Show your work

Question	Answer
#1	choice 4, choice 3, choice 2
#2	choice 1, choice 3
#3	choice 4, choice 1, choice 2
#4	choice 1
#5	choice 2
#6	choice 4
#7	choice 3, choice 4
#8	choice 1, choice 2, choice 4
#9	choice 3, choice 4
#10	choice 4
#11	choice 4, choice 2, choice 1
#12	choice 3, choice 2, choice 4