




#1




Which of the following objects is a hexagon?



Show your work

#2



Which of the following objects is a circle?



Show your work

#3

Which of the following objects is a square?






Show your work



#4



Which of the following objects is a pentagon?



Show your work

#5



Which of the following objects is a octagon?



Show your work

#6

Which of the following objects is a octagon?





Show your work



#7




Which of the following objects is a pentagon?

☐☐☐

Show your work

#8



Which of the following objects is a hexagon?

☐☐☐

Show your work

#9

Which of the following objects is a star?




☐☐☐

Show your work



#10


Which of the following objects is a circle?



Show your work

#11



Which of the following objects is a star?



Show your work

#12

Which of the following objects is a rhombus?



Show your work

Question	Answer
#1	choice 2
#2	choice 2
#3	choice 3
#4	choice 2
#5	choice 2
#6	choice 1
#7	choice 1
#8	choice 2
#9	choice 1
#10	choice 2
#11	choice 3
#12	choice 2