




#1




Which of the following objects is a pentagon?



Show your work

#2




Which of the following objects is a triangle?



Show your work

#3




Which of the following objects is a star?



Show your work

#4




Which of the following objects is a octagon?



Show your work

#5



Which of the following objects is a circle?



Show your work

#6




Which of the following objects is a triangle?



Show your work

#7



Which of the following objects is a circle?



Show your work

#8




Which of the following objects is a octagon?



Show your work

#9



Which of the following objects is a octagon?



Show your work

#10




Which of the following objects is a star?



Show your work

#11



Which of the following objects is a triangle?



Show your work

#12

Which of the following objects is a pentagon?



Show your work

Question	Answer
#1	choice 1
#2	choice 3
#3	choice 3
#4	choice 3
#5	choice 3
#6	choice 2
#7	choice 3
#8	choice 1
#9	choice 3
#10	choice 1
#11	choice 2
#12	choice 3