




#1

Which of the following objects is a octagon?








Show your work

#2

Which of the following objects is a triangle?








Show your work

#3

Which of the following objects is a star?








Show your work

#4

Which of the following objects is a star?








Show your work

#5

Which of the following objects is a octagon?








Show your work

#6

Which of the following objects is a triangle?









Show your work

#7



Which of the following objects is a circle?



Show your work

#8



Which of the following objects is a star?



Show your work

#9

Which of the following objects is a pentagon?






Show your work



#10



Which of the following objects is a octagon?



Show your work

#11




Which of the following objects is a hexagon?



Show your work

#12

Which of the following objects is a triangle?



Show your work

Question	Answer
#1	choice 2
#2	choice 3
#3	choice 3
#4	choice 3
#5	choice 1
#6	choice 2
#7	choice 3
#8	choice 2
#9	choice 3
#10	choice 2
#11	choice 2
#12	choice 2