



#1



Which one of these is a cylinder?



Show your work

#2


Which one of these is a rectangular pyramid?



Show your work

#3



Which one of these is a cylinder?



Show your work

#4

Which one of these is a rectangular prism?








Show your work

#5

Which one of these is a cone?








Show your work

#6

Which one of these is a rectangular pyramid?









Show your work

#7

Which one of these is a cone?








Show your work

#8

Which one of these is a cone?








Show your work

#9

Which one of these is a cylinder?









Show your work



#10


Which one of these is a cube?



Show your work

#11



Which one of these is a rectangular prism?



Show your work

#12

Which one of these is a triangular prism?



Show your work

Question	Answer
#1	choice 1
#2	choice 3
#3	choice 1
#4	choice 1
#5	choice 1
#6	choice 2
#7	choice 3
#8	choice 2
#9	choice 2
#10	choice 3
#11	choice 2
#12	choice 2