



#1


Which one of these is a triangular prism?



Show your work

#2


Which one of these is a rectangular prism?



Show your work

#3



Which one of these is a rectangular pyramid?



Show your work

#4



Which one of these is a cylinder?



Show your work

#5


Which one of these is a rectangular pyramid?



Show your work

#6



Which one of these is a rectangular pyramid?



Show your work

#7



Which one of these is a triangular prism?



Show your work

#8


Which one of these is a cylinder?



Show your work

#9



Which one of these is a triangular prism?



Show your work

#10


Which one of these is a cone?



Show your work

#11



Which one of these is a rectangular prism?



Show your work

#12

Which one of these is a cone?



Show your work

Question	Answer
#1	choice 3
#2	choice 1
#3	choice 1
#4	choice 2
#5	choice 3
#6	choice 1
#7	choice 3
#8	choice 2
#9	choice 3
#10	choice 2
#11	choice 1
#12	choice 2