





#1



Which one of these is a cube?



Show your work

#2



Which one of these is a cone?



Show your work

#3


Which one of these is a rectangular prism?



Show your work

#4


Which one of these is a rectangular pyramid?



Show your work

#5


Which one of these is a rectangular pyramid?



Show your work

#6


Which one of these is a triangular pyramid?



Show your work

#7

Which one of these is a cylinder?



Show your work

#8



Which one of these is a triangular pyramid?



Show your work

#9

Which one of these is a rectangular pyramid?




Show your work



#10


Which one of these is a rectangular prism?



Show your work

#11



Which one of these is a rectangular prism?



Show your work

#12

Which one of these is a rectangular prism?



Show your work

Question	Answer
#1	choice 3
#2	choice 2
#3	choice 2
#4	choice 3
#5	choice 1
#6	choice 2
#7	choice 3
#8	choice 2
#9	choice 2
#10	choice 2
#11	choice 1
#12	choice 3