



#1

How many sides does this shape have?



4

5


1

6

Show your work

#2

How many corners does this shape have?



2

0


3

1

Show your work

#3

How many sides does this shape have?



2

4

6


5

Show your work



#4

How many sides does this shape have?



7

5

4

6

Show your work

#5

How many sides does this shape have?



5

4

7

3

Show your work

#6

How many corners does this shape have?



4

6

3

2

Show your work



#7

How many sides does this shape have?



4

5

2

1

Show your work

#8

How many sides does this shape have?



4

5

6

3

Show your work

#9

How many corners does this shape have?



8

4

9

6

Show your work



#10

How many sides does this shape have?

 3 6 2 0

Show your work

#11

How many sides does this shape have?

 4 2 1 6

Show your work

#12

How many corners does this shape have?

 5 4 7 2

Show your work

Question	Answer
#1	4
#2	3
#3	4
#4	4
#5	5
#6	3
#7	4
#8	3
#9	6
#10	3
#11	4
#12	4