



#1

How many corners does this shape have?



3

5


4

7

Show your work

#2

How many corners does this shape have?



5

3

7

4

Show your work

#3

How many sides does this shape have?



4

2

5

7

Show your work



#4

How many corners does this shape have?



1

6

4

5

Show your work

#5

How many sides does this shape have?



0

5


4

3

Show your work

#6

How many sides does this shape have?



4

7

2

6

Show your work



#7

How many sides does this shape have?



4

1

5

3

Show your work

#8

How many corners does this shape have?



1

2


4

5

Show your work

#9

How many corners does this shape have?



6

2

5


7

Show your work



#10

How many sides does this shape have?



5

7

4

2

Show your work

#11

How many corners does this shape have?



3

6


2

0

Show your work

#12

How many sides does this shape have?



6

5

8

4

Show your work

Question	Answer
#1	4
#2	4
#3	4
#4	4
#5	3
#6	4
#7	4
#8	4
#9	5
#10	4
#11	3
#12	6