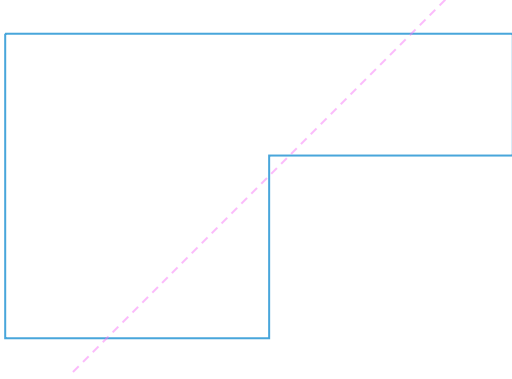


#1

Is the dotted line a line of symmetry?



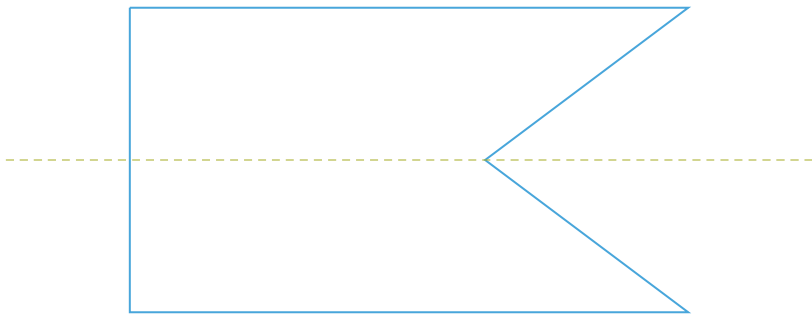
Yes

No

Show your work

#2

Is the dotted line a line of symmetry?



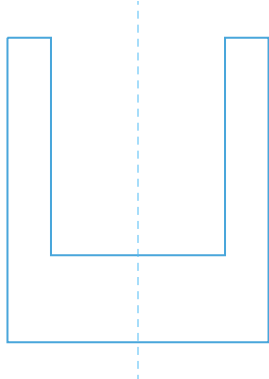
No

Yes

Show your work

#3

Is the dotted line a line of symmetry?



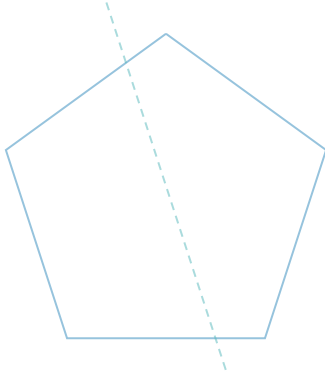
No

Yes

Show your work

#4

Is the dotted line a line of symmetry?

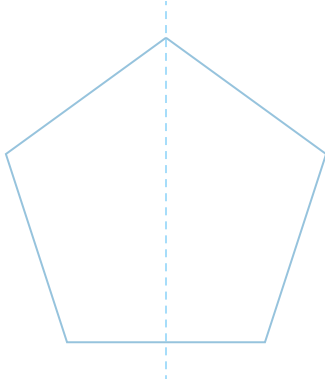


- No
  Yes

Show your work

#5

Is the dotted line a line of symmetry?

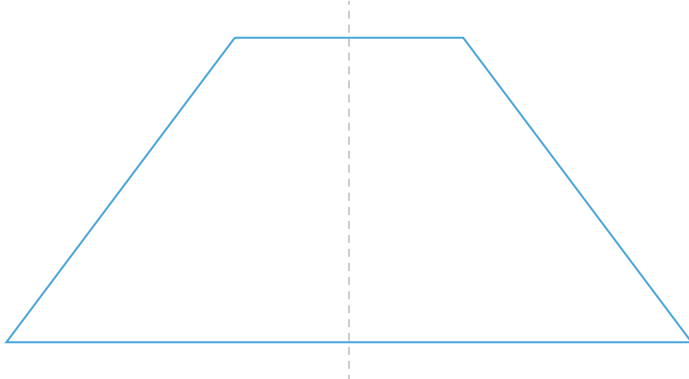


- No
  Yes

Show your work

#6

Is the dotted line a line of symmetry?

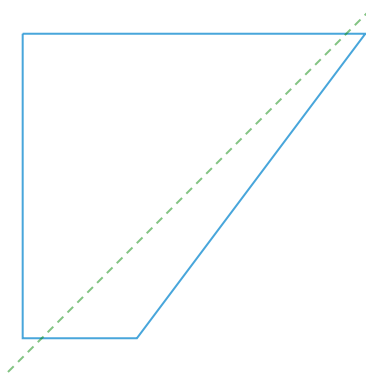


- Yes
  No

Show your work

#7

Is the dotted line a line of symmetry?

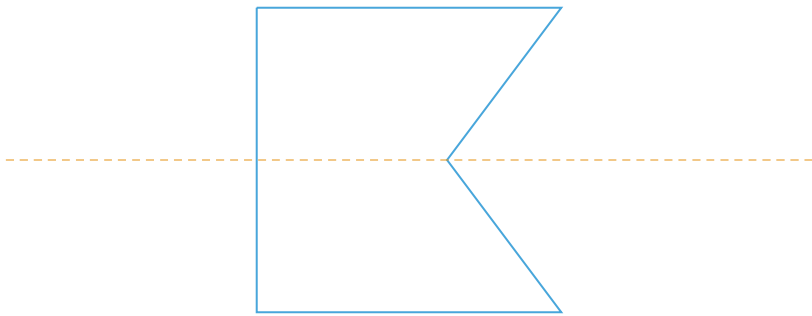


- No
  Yes

Show your work

#8

Is the dotted line a line of symmetry?

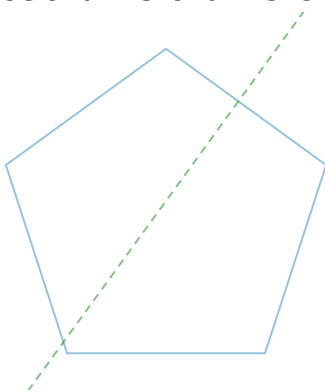


- Yes
  No

Show your work

#9

Is the dotted line a line of symmetry?



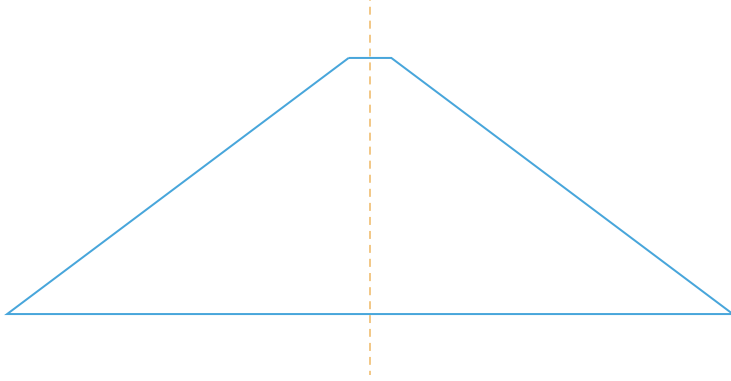
- No
  Yes

Show your work



#10

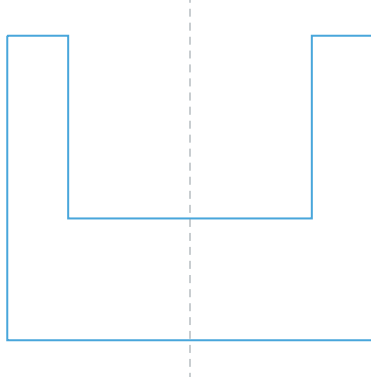
Is the dotted line a line of symmetry?

 Yes No

Show your work

#11

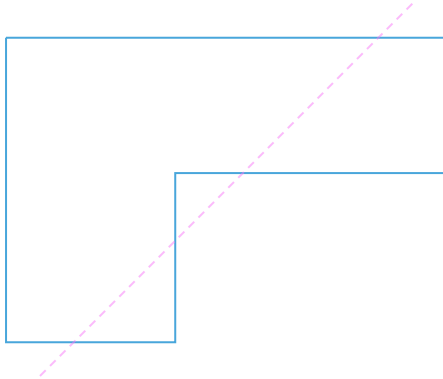
Is the dotted line a line of symmetry?

 Yes No

Show your work

#12

Is the dotted line a line of symmetry?

 No Yes

Show your work

Question	Answer
#1	choice 2
#2	choice 2
#3	choice 2
#4	choice 1
#5	choice 2
#6	choice 1
#7	choice 1
#8	choice 1
#9	choice 2
#10	choice 1
#11	choice 1
#12	choice 1