



#1

Which object is lighter?



Show your work

#2

Which object is heavier?



Show your work

#3

Which object is lighter?




Show your work



#4

Which object is heavier?



Show your work

#5

Which object is lighter?



Show your work

#6

Which object is heavier?




Show your work



#7

Which object is heavier?



Show your work

#8


Which object is lighter?



Show your work

#9

Which object is lighter?



Show your work



#10

Which object is heavier?



Show your work

#11

Which object is lighter?



Show your work

#12

Which object is lighter?



Show your work

Question	Answer
#1	choice 1
#2	choice 2
#3	choice 2
#4	choice 1
#5	choice 1
#6	choice 2
#7	choice 1
#8	choice 2
#9	choice 1
#10	choice 1
#11	choice 1
#12	choice 1