




#1


Which holds more?



Show your work

#2


Which holds more?



Show your work

#3

Which holds more?




Show your work



#4



Which holds more?



Show your work

#5

Which holds more?



Show your work

#6

Which holds less?




Show your work



#7

Which holds more?



Show your work

#8

Which holds more?



Show your work

#9

Which holds more?




Show your work



#10


Which holds less?



Show your work

#11


Which holds less?



Show your work

#12

Which holds less?



Show your work



| Question | Answer |
|----------|----------|
| #1 | choice 2 |
| #2 | choice 2 |
| #3 | choice 1 |
| #4 | choice 2 |
| #5 | choice 2 |
| #6 | choice 2 |
| #7 | choice 2 |
| #8 | choice 1 |
| #9 | choice 2 |
| #10 | choice 1 |
| #11 | choice 2 |
| #12 | choice 2 |