


#1

Which object is lighter?



Show your work

#2

Which paper towel is the tallest?



Show your work

#3

Which train is the longest?



Show your work



#4



Which bus is the shortest?



Show your work

#5

Which object is lighter?



Show your work

#6

Which object is heavier?




Show your work



#7

Which battery is the shortest?



Show your work

#8

Which doll is the shortest?



Show your work

#9

Which trash can is the tallest?



Show your work



#10

Which pitcher is the tallest?



Show your work

#11

Which skateboard is the longest?



Show your work

#12

Which train is the longest?



Show your work

Question	Answer
#1	choice 2
#2	choice 1
#3	choice 2
#4	choice 2
#5	choice 1
#6	choice 2
#7	choice 1
#8	choice 1
#9	choice 1
#10	choice 3
#11	choice 1
#12	choice 3