




#1

Put these numbers in order, from least to greatest.



Show your work

#2


Put these numbers in order, from least to greatest.



Show your work

#3

Put these numbers in order, from least to greatest.




Show your work



#4

Put these numbers in order, from least to greatest.



Show your work

#5

Put these numbers in order, from least to greatest.



Show your work

#6

Put these numbers in order, from least to greatest.




Show your work



#7

Put these numbers in order, from least to greatest.



Show your work

#8

Put these numbers in order, from least to greatest.



Show your work

#9

Put these numbers in order, from least to greatest.




Show your work



#10

Put these numbers in order, from least to greatest.



Show your work

#11

Put these numbers in order, from least to greatest.



Show your work

#12

Put these numbers in order, from least to greatest.



Show your work

Question	Answer
#1	4, 6, 9
#2	1, 3, 5
#3	3, 5, 10
#4	2, 4, 6
#5	7, 9, 10
#6	4, 5, 7
#7	4, 7, 8
#8	1, 3, 6
#9	1, 5, 9
#10	7, 9, 10
#11	6, 9, 10
#12	3, 4, 7