


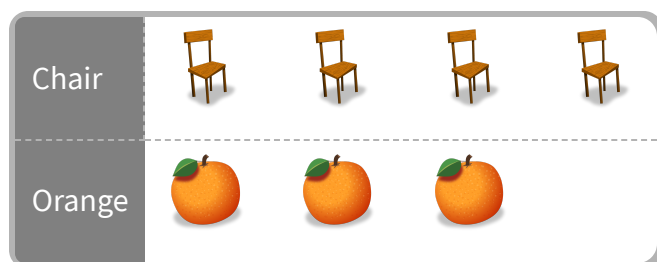
- #1 At the store, Ethan bought some planes and tigers. He made a picture graph of the supplies he bought. Did Ethan buy more planes or tigers?



planes tigers

Show your work

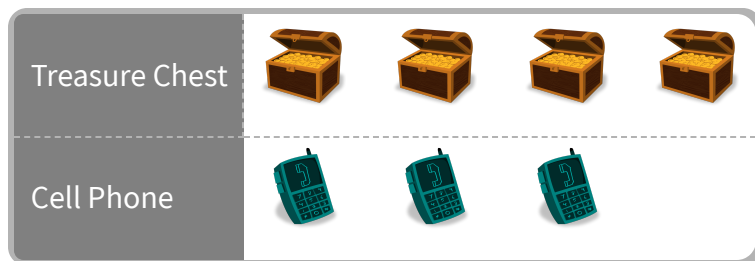
- #2 At the store, Caden bought some chairs and oranges. He made a picture graph of the supplies he bought. Did Caden buy more chairs or oranges?



oranges chairs

Show your work


- #3 At the store, Samantha bought some treasure chests and cell phones. She made a picture graph of the supplies she bought. Did Samantha buy less treasure chests or cell phones?



cell phones treasure chests

Show your work

- #4 At the store, Kaylee bought some apples and action figures. She made a picture graph of the supplies she bought. Did Kaylee buy less apples or action figures?



apples action figures

Show your work

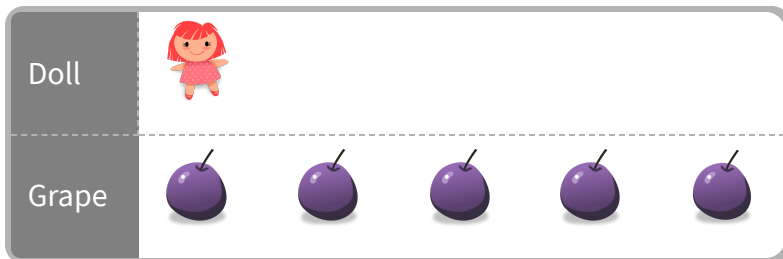
- #5 At the store, Jacob bought some cell phones and presents. He made a picture graph of the supplies he bought. Did Jacob buy more cell phones or presents?



presents cell phones

Show your work


- #6 At the store, Benjamin bought some dolls and grapes. He made a picture graph of the supplies he bought. Did Benjamin buy more dolls or grapes?



dolls grapes

Show your work


- #7 At the store, Joseph bought some ants and bicycles. He made a picture graph of the supplies he bought. Did Joseph buy more ants or bicycles?



- bicycles ants

Show your work


- #8 At the store, Dahlia bought some presents and batteries. She made a picture graph of the supplies she bought. Did Dahlia buy less presents or batteries?



- batteries presents

Show your work

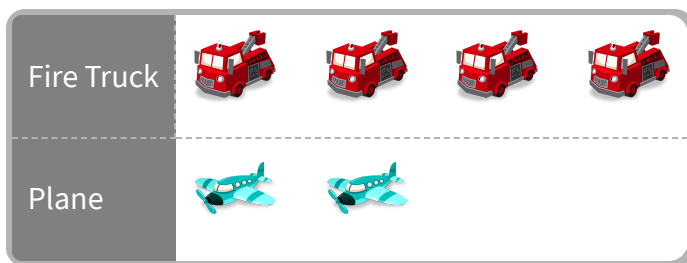
- #9 At the store, Sophia bought some treasure chests and dolls. She made a picture graph of the supplies she bought. Did Sophia buy more treasure chests or dolls?



- treasure chests dolls

Show your work

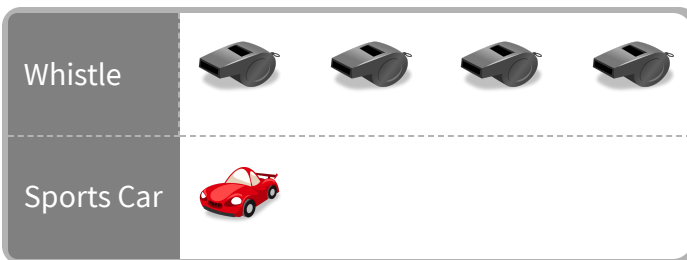
#10 At the store, Dylan bought some fire trucks and planes. He made a picture graph of the supplies he bought. Did Dylan buy more fire trucks or planes?



- fire trucks planes

Show your work


#11 At the store, Sydney bought some whistles and sports cars. She made a picture graph of the supplies she bought. Did Sydney buy more whistles or sports cars?



- sports cars whistles

Show your work

#12 At the store, Emma bought some ants and skateboards. She made a picture graph of the supplies she bought. Did Emma buy more ants or skateboards?



- skateboards ants

Show your work

| Question | Answer |
|----------|----------|
| #1 | choice 1 |
| #2 | choice 2 |
| #3 | choice 1 |
| #4 | choice 1 |
| #5 | choice 2 |
| #6 | choice 2 |
| #7 | choice 2 |
| #8 | choice 2 |
| #9 | choice 2 |
| #10 | choice 1 |
| #11 | choice 2 |
| #12 | choice 2 |