

#1

Count the pitchers. Now type the missing numbers:



$$\boxed{} \text{ tens} + \boxed{} \text{ ones} = \boxed{}$$

Show your work

#2

Count the action figures. Now type the missing numbers:



$$\boxed{} \text{ tens} + \boxed{} \text{ ones} = \boxed{}$$

Show your work

#3

Count the fire trucks. Now type the missing numbers:




$$\boxed{} \text{ tens} + \boxed{} \text{ ones} = \boxed{}$$

Show your work

#4

Count the lamps. Now type the missing numbers:




$$\boxed{} \text{ tens} + \boxed{} \text{ ones} = \boxed{}$$

Show your work

#5

Count the grapes. Now type the missing numbers:




$$\boxed{} \text{ tens} + \boxed{} \text{ ones} = \boxed{}$$

Show your work

#6

Count the trains. Now type the missing numbers:



$$\boxed{} \text{ tens} + \boxed{} \text{ ones} = \boxed{}$$

Show your work

#7

Count the cars. Now type the missing numbers:



$$\boxed{} \text{ tens} + \boxed{} \text{ ones} = \boxed{}$$

Show your work

#8

Count the planes. Now type the missing numbers:




$$\boxed{} \text{ tens} + \boxed{} \text{ ones} = \boxed{}$$

Show your work

#9

Count the batteries. Now type the missing numbers:




$$\boxed{} \text{ tens} + \boxed{} \text{ ones} = \boxed{}$$

Show your work

#10

Count the bananas. Now type the missing numbers:




$$\boxed{} \text{ tens} + \boxed{} \text{ ones} = \boxed{}$$

Show your work

#11

Count the ants. Now type the missing numbers:



$$\boxed{} \text{ tens} + \boxed{} \text{ ones} = \boxed{}$$

Show your work

#12

Count the records. Now type the missing numbers:



$$\boxed{} \text{ tens} + \boxed{} \text{ ones} = \boxed{}$$

Show your work

Question	Answer
#1	10, 0, 1
#2	11, 1, 1
#3	10, 0, 1
#4	18, 8, 1
#5	11, 1, 1
#6	14, 4, 1
#7	20, 0, 2
#8	3, 3, 0
#9	16, 6, 1
#10	6, 6, 0
#11	13, 3, 1
#12	19, 9, 1