


#1

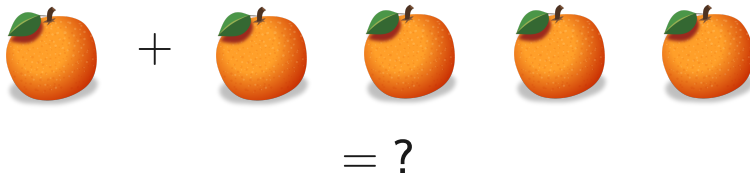
Add



Show your work

#2

Add



3

4

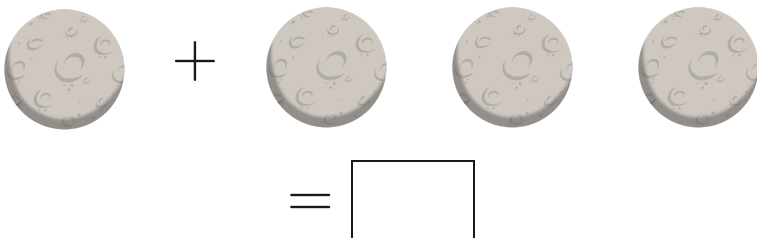
5

6

Show your work

#3

Add



Show your work

#4

Add



= ?

3

4

2

7

Show your work

#5

Add



=

Show your work

#6

Add



= ?

4

5


3

1

Show your work

#7

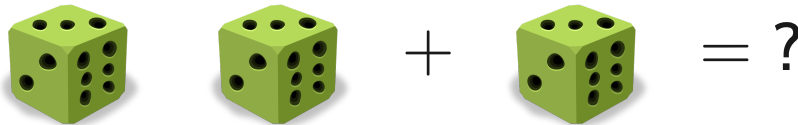
Add


$$= \square$$

Show your work

#8

Add


$$= ?$$

4

6


3

0

Show your work

#9

Add


$$= \square$$

Show your work

#10

Add



4

0

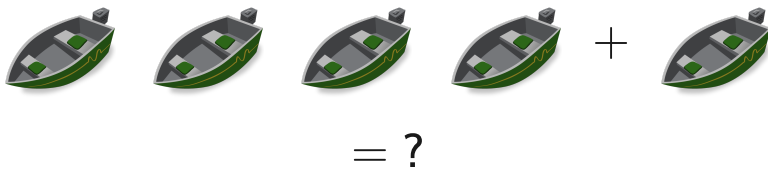
1

2

Show your work

#11

Add



7

4

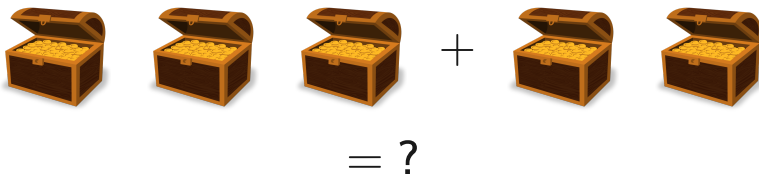
5

6

Show your work

#12

Add



5

6

2

3

Show your work

Question	Answer
#1	5
#2	5
#3	4
#4	4
#5	5
#6	4
#7	5
#8	3
#9	4
#10	2
#11	5
#12	5