



#1



Which picture shows  $1 + 2 = 3$ ?



Show your work

#2



Which picture shows  $4 + 1 = 5$ ?



Show your work

#3



Which picture shows  $3 + 1 = 4$ ?



Show your work

#4



Which picture shows  $2 + 3 = 5$ ?



Show your work

#5



Which picture shows  $3 + 2 = 5$ ?



Show your work

#6



Which picture shows  $1 + 4 = 5$ ?



Show your work

#7



Which picture shows  $1 + 2 = 3$ ?



Show your work

#8



Which picture shows  $3 + 1 = 4$ ?



Show your work

#9



Which picture shows  $2 + 2 = 4$ ?



Show your work

#10



Which picture shows  $4 + 1 = 5$ ?



Show your work

#11



Which picture shows  $2 + 3 = 5$ ?



Show your work

#12

Which picture shows  $3 + 2 = 5$ ?



Show your work

Question	Answer
#1	choice 2
#2	choice 1
#3	choice 1
#4	choice 1
#5	choice 2
#6	choice 1
#7	choice 2
#8	choice 2
#9	choice 2
#10	choice 1
#11	choice 1
#12	choice 2