


#1

Subtract



2

7

4

5

Show your work

#2

Subtract



Show your work

#3

Subtract



= ?

4

5

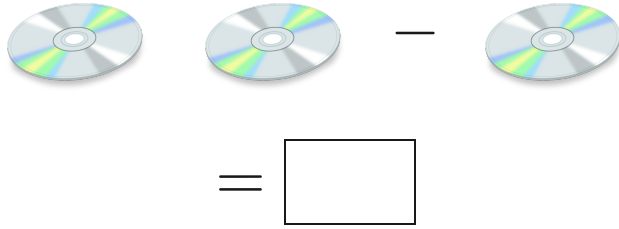
1

3

Show your work

#4

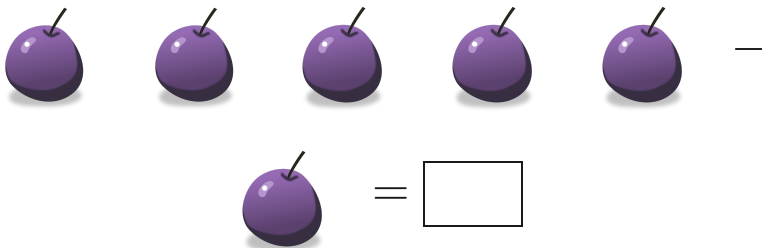
Subtract



Show your work

#5


Subtract



Show your work

#6

Subtract



1

2

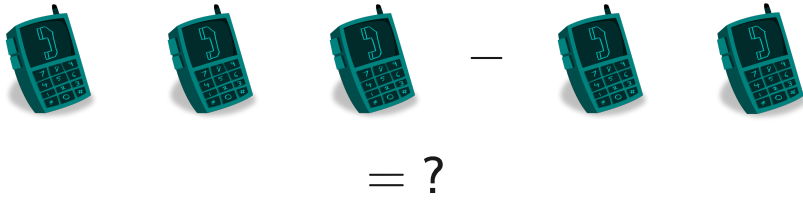
0

3

Show your work

#7

Subtract



0

3

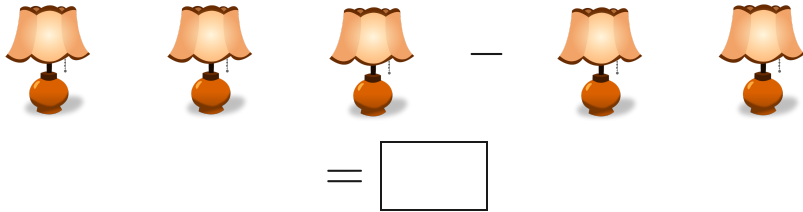
1

2

Show your work

#8

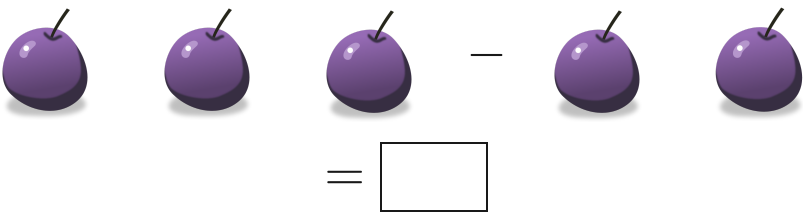
Subtract



Show your work

#9


Subtract



Show your work

#10


Subtract



Show your work

#11


Subtract



Show your work

#12

Subtract



Show your work

Question	Answer
#1	4
#2	1
#3	3
#4	1
#5	4
#6	1
#7	1
#8	1
#9	1
#10	2
#11	2
#12	2