

#1

Add



= ?

2

1

7

4

Show your work

#2

Add



= ?

8

2

5

6

Show your work

#3

Add



= ?

7

4


2

5

Show your work

#4

Add



0

3

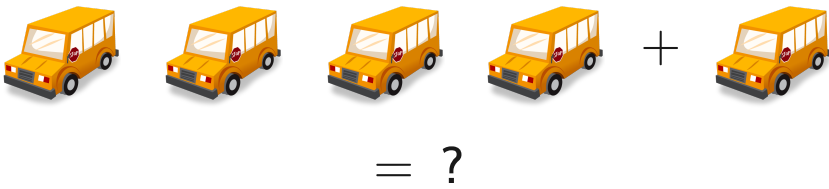
2

5

Show your work

#5

Add



6

2


7

5

Show your work

#6

Add



3

1

2

4

Show your work

#7

Add



3

5

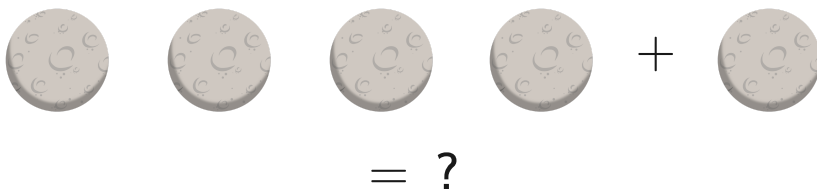
0

6

Show your work

#8

Add



5

7

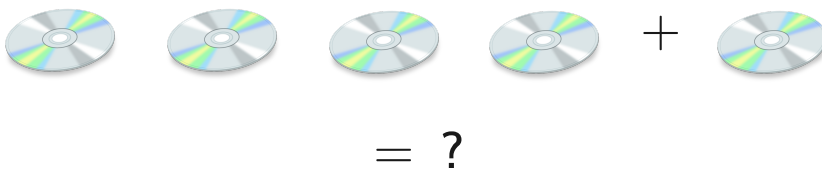
8

4

Show your work

#9

Add



6

7



3

5

Show your work

#10

Add

 $+$ 
 $= ?$

7

4

3

1

Show your work

#11

Add

 $+$  $= ?$

4

0



5

2

Show your work

#12

Add

 $+$ 
 $= ?$

5

7

4

3

Show your work

Question	Answer
#1	4
#2	5
#3	4
#4	2
#5	5
#6	4
#7	3
#8	5
#9	5
#10	4
#11	2
#12	4