

#1

Subtract



1

2

0

4

Show your work

#2

Subtract



3

1

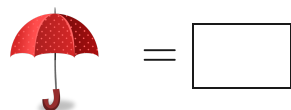
4

2

Show your work

#3

Subtract



Show your work

#4


Subtract



Show your work

#5

Subtract



5

4


3

1

Show your work

#6

Subtract



Show your work

#7

Subtract

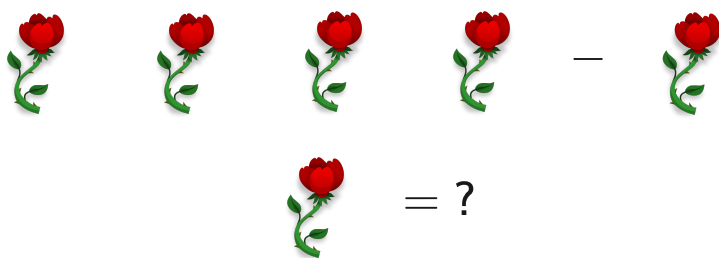


- 5
- 4
- 0
- 2

Show your work

#8

Subtract




- 3
- 2
- 0
- 5

Show your work

#9

Subtract

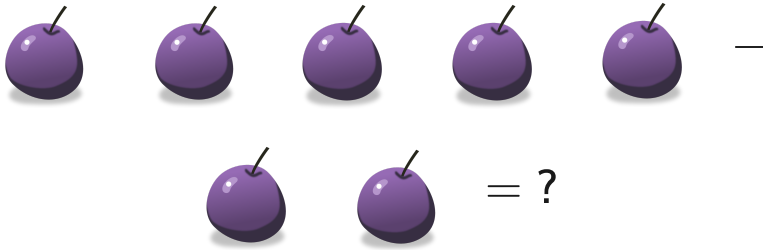


- 3
- 0
- 2
- 1

Show your work

#10

Subtract



- 0
- 3
- 6
- 4

Show your work

#11

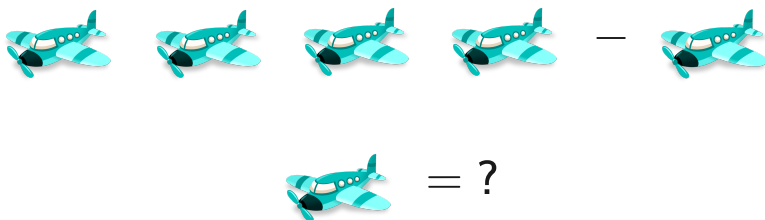
Subtract



Show your work

#12

Subtract



- 1
- 2
- 4
- 0

Show your work

Question	Answer
#1	2
#2	1
#3	4
#4	1
#5	4
#6	1
#7	2
#8	2
#9	1
#10	3
#11	1
#12	2