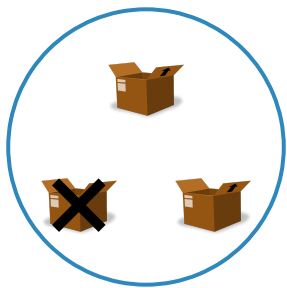
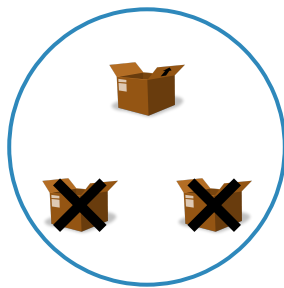


#1

Which picture shows $3 - 1 = 2$?







Show your work

#2

Which picture shows $4 - 1 = 3$?







Show your work

#3

Which picture shows $5 - 3 = 2$?

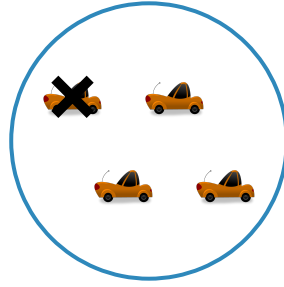
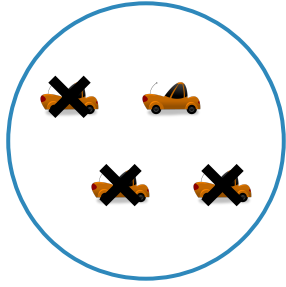




Show your work

#4



Which picture shows $4 - 3 = 1$?



Show your work

#5



Which picture shows $3 - 1 = 2$?



Show your work

#6

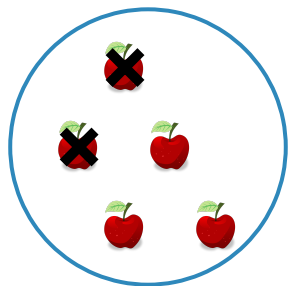
Which picture shows $5 - 1 = 4$?




Show your work

#7

Which picture shows $5 - 2 = 3$?







Show your work

#8

Which picture shows $5 - 1 = 4$?







Show your work

#9

Which picture shows $3 - 2 = 1$?






Show your work

#10

Which picture shows $3 - 2 = 1$?




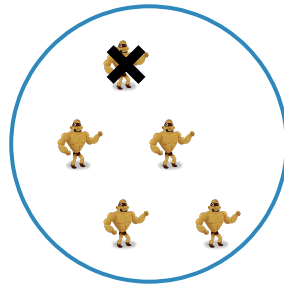


Show your work

#11

Which picture shows $5 - 4 = 1$?




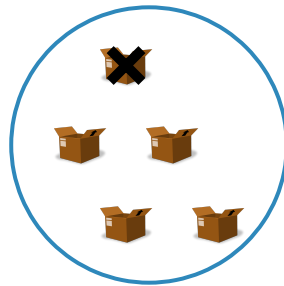


Show your work

#12

Which picture shows $5 - 4 = 1$?





Show your work

Question	Answer
#1	choice 1
#2	choice 2
#3	choice 1
#4	choice 1
#5	choice 1
#6	choice 1
#7	choice 1
#8	choice 1
#9	choice 1
#10	choice 1
#11	choice 1
#12	choice 1