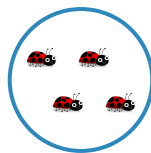
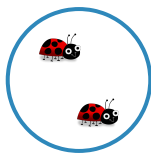
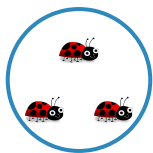




#1 Count the ladybugs. How many more ladybugs do you need to make 10?






Show your work

#2 Count the chairs. How many more chairs do you need to make 10?



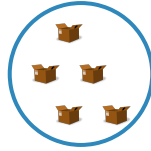
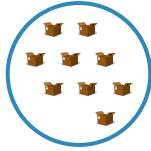
Show your work

#3 Count the moons. How many more moons do you need to make 10?



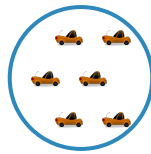
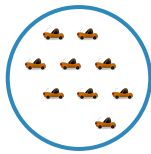
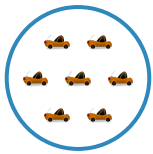
Show your work

#4 Count the boxes. How many more boxes do you need to make 10?



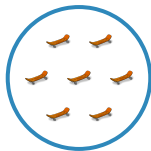

Show your work

#5 Count the cars. How many more cars do you need to make 10?



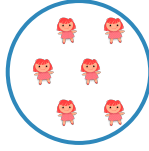


Show your work

#6 Count the skateboards. How many more skateboards do you need to make 10?



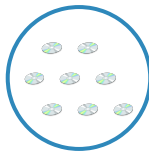
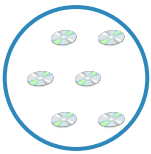
Show your work

#7 Count the dolls. How many more dolls do you need to make 10?




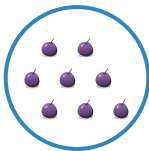
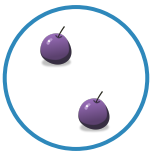
Show your work

#8 Count the compact discs. How many more compact discs do you need to make 10?



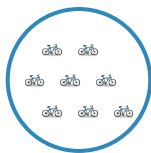
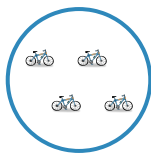
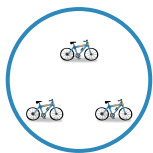
Show your work

#9 Count the grapes. How many more grapes do you need to make 10?



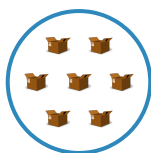
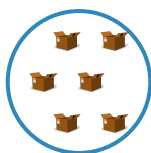
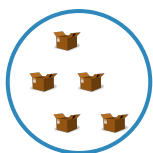
Show your work

#10 Count the bicycles. How many more bicycles do you need to make 10?




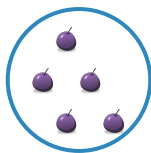
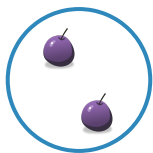

Show your work

#11 Count the boxes. How many more boxes do you need to make 10?



Show your work

#12 Count the grapes. How many more grapes do you need to make 10?



Show your work

Question	Answer
#1	choice 1
#2	choice 3
#3	choice 3
#4	choice 3
#5	choice 1
#6	choice 2
#7	choice 2
#8	choice 3
#9	choice 1
#10	choice 1
#11	choice 2
#12	choice 3