
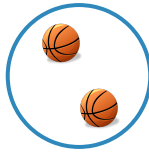


#1 Count the fire trucks. How many more fire trucks do you need to make 10?




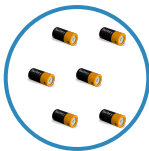

Show your work

#2 Count the basketballs. How many more basketballs do you need to make 10?






Show your work

#3 Count the batteries. How many more batteries do you need to make 10?





Show your work

#4 Count the batteries. How many more batteries do you need to make 10?



Show your work

#5 Count the batteries. How many more batteries do you need to make 10?






Show your work

#6 Count the buses. How many more buses do you need to make 10?



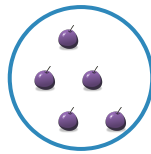


Show your work

#7 Count the oranges. How many more oranges do you need to make 10?



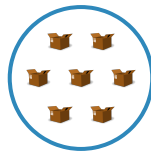
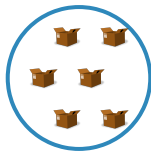
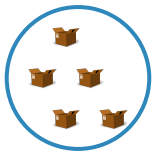
Show your work

#8 Count the grapes. How many more grapes do you need to make 10?



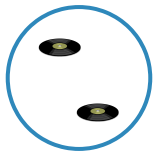
Show your work

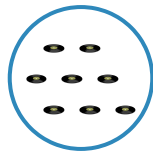
#9 Count the boxes. How many more boxes do you need to make 10?

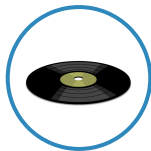


Show your work

#10 Count the records. How many more records do you need to make 10?

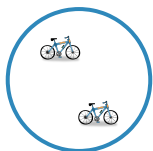


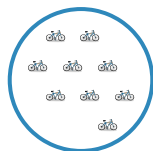


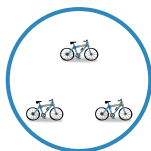


Show your work

#11 Count the bicycles. How many more bicycles do you need to make 10?








Show your work

#12 Count the buses. How many more buses do you need to make 10?







Show your work

Question	Answer
#1	choice 2
#2	choice 2
#3	choice 1
#4	choice 2
#5	choice 2
#6	choice 3
#7	choice 3
#8	choice 3
#9	choice 2
#10	choice 2
#11	choice 2
#12	choice 3