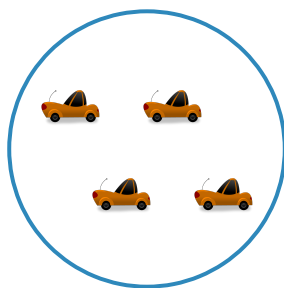


#1



Which group has more cars?



Show your work

#2

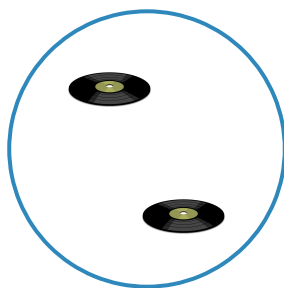
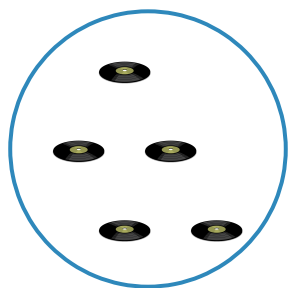
Which group has more chairs?



Show your work

#3

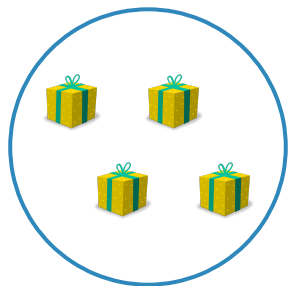
Which group has fewer records?



Show your work

#4

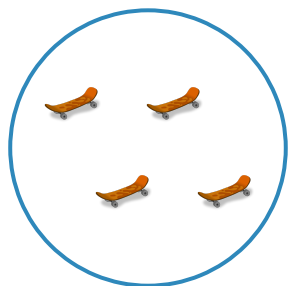
Which group has more presents?



Show your work

#5

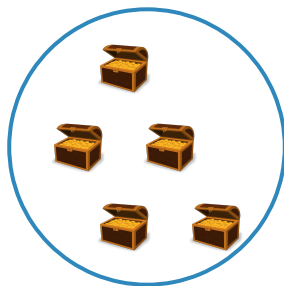
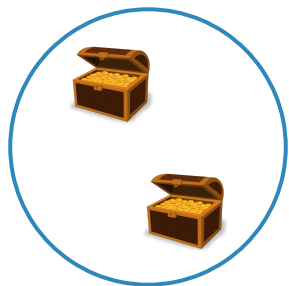
Which group has more skateboards?



Show your work

#6

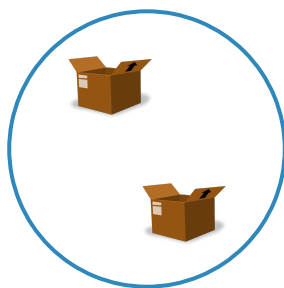
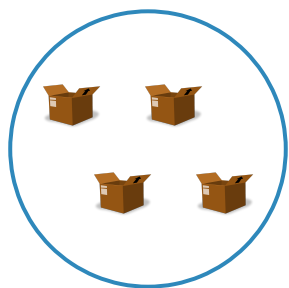
Which group has more treasure chests?



Show your work

#7


Which group has more boxes?



Show your work

#8

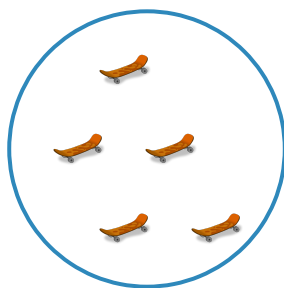
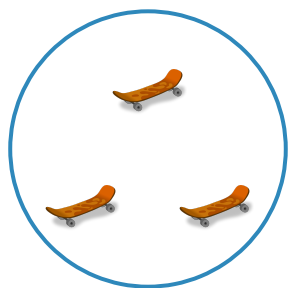
Which group has fewer ants?



Show your work

#9


Which group has more skateboards?



Show your work

#10


Which group has fewer whistles?



Show your work

#11


Which group has more chairs?



Show your work

#12

Which group has more fire trucks?



Show your work

Question	Answer
#1	choice 2
#2	choice 2
#3	choice 2
#4	choice 1
#5	choice 1
#6	choice 2
#7	choice 1
#8	choice 1
#9	choice 2
#10	choice 1
#11	choice 1
#12	choice 1