

#1


Are there more skateboards or basketballs?



Show your work

#2


Are there more bananas or moons?



Show your work

#3

Are there fewer boats or treasure chests?



Show your work

#4 Is there a greater number of apples or action figures?



Show your work

#5 Is there a smaller number of moons or lamps?



Show your work

#6 Is there a greater number of ladybugs or trains?



Show your work

#7

Are there more tigers or oranges?



Show your work

#8


Is there a smaller number of hats or presents?



Show your work

#9


Are there more skateboards or batteries?



Show your work

#10

Is there a greater number of whistles or boxes?



Show your work

#11

Are there more sports cars or planes?



Show your work

#12

Is there a greater number of basketballs or pitchers?



Show your work

Question	Answer
#1	choice 2
#2	choice 2
#3	choice 1
#4	choice 1
#5	choice 1
#6	choice 2
#7	choice 1
#8	choice 1
#9	choice 1
#10	choice 1
#11	choice 1
#12	choice 1