

#1


Is there a smaller number of hats or presents?



Show your work

#2


Is there a greater number of treasure chests or boats?



Show your work

#3

Is there a greater number of whistles or boxes?



Show your work

#4 Is there a smaller number of action figures or hats?




Show your work

#5 Is there a greater number of lamps or fire trucks?



Show your work

#6 Is there a smaller number of whistles or bicycles?



Show your work

#7

Is there a smaller number of records or flowers?



Show your work

#8

Are there more presents or sports cars?



Show your work

#9

Is there a smaller number of pitchers or bananas?



Show your work

#10

Are there more skateboards or basketballs?



Show your work

#11

Are there fewer bananas or records?



Show your work

#12

Are there fewer treasure chests or presents?



Show your work

Question	Answer
#1	choice 1
#2	choice 1
#3	choice 1
#4	choice 1
#5	choice 2
#6	choice 2
#7	choice 1
#8	choice 1
#9	choice 2
#10	choice 2
#11	choice 2
#12	choice 1