



#1


Which shape has fewer sides?



Show your work

#2

Which shape has fewer corners?



Show your work

#3

Which shape has fewer sides?




Show your work



#4


Which shape has fewer sides?



Show your work

#5

Which shape has more sides?



Show your work

#6

Which shape has more corners?





Show your work



#7


Which shape has fewer corners?



Show your work

#8



Which shape has fewer corners?



Show your work

#9

Which shape has more corners?




Show your work



#10


Which shape has fewer sides?



Show your work

#11



Which shape has fewer corners?



Show your work

#12

Which shape has more corners?



Show your work

Question	Answer
#1	choice 1
#2	choice 2
#3	choice 2
#4	choice 1
#5	choice 1
#6	choice 1
#7	choice 1
#8	choice 2
#9	choice 2
#10	choice 1
#11	choice 1
#12	choice 1