



#1



Which holds more?



Show your work

#2

Which holds less?



Show your work

#3

Which holds more?





Show your work



#4

Which holds more?



Show your work

#5


Which holds more?



Show your work

#6

Which holds less?



Show your work



#7


Which holds less?



Show your work

#8

Which holds more?



Show your work

#9

Which holds more?




Show your work



#10



Which holds more?



Show your work

#11


Which holds less?



Show your work

#12

Which holds more?



Show your work



Question	Answer
#1	choice 2
#2	choice 1
#3	choice 2
#4	choice 2
#5	choice 1
#6	choice 2
#7	choice 2
#8	choice 1
#9	choice 2
#10	choice 2
#11	choice 1
#12	choice 2