


#1



Which of the following objects is a square?



Show your work

#2



Which of the following objects is a triangle?



Show your work

#3




Which of the following objects is a triangle?



Show your work

#4



Which of the following objects is a star?



Show your work

#5



Which of the following objects is a star?



Show your work

#6



Which of the following objects is a square?



Show your work

#7




Which of the following objects is a circle?



Show your work

#8



Which of the following objects is a star?



Show your work

#9




Which of the following objects is a rectangle?



Show your work

#10



Which of the following objects is a star?



Show your work

#11




Which of the following objects is a triangle?



Show your work

#12

Which of the following objects is a rectangle?



Show your work

Question	Answer
#1	choice 3
#2	choice 2
#3	choice 3
#4	choice 2
#5	choice 2
#6	choice 2
#7	choice 1
#8	choice 2
#9	choice 3
#10	choice 2
#11	choice 1
#12	choice 3