


#1



Which of the following objects is a star?



Show your work

#2




Which of the following objects is a triangle?



Show your work

#3



Which of the following objects is a circle?



Show your work

#4



Which of the following objects is a triangle?



Show your work

#5




Which of the following objects is a circle?



Show your work

#6



Which of the following objects is a star?



Show your work

#7




Which of the following objects is a circle?



Show your work

#8



Which of the following objects is a star?



Show your work

#9


Which of the following objects is a rectangle?



Show your work

#10


Which of the following objects is a star?



Show your work

#11


Which of the following objects is a triangle?



Show your work

#12

Which of the following objects is a star?



Show your work

| Question | Answer   |
|----------|----------|
| #1       | choice 1 |
| #2       | choice 1 |
| #3       | choice 2 |
| #4       | choice 3 |
| #5       | choice 2 |
| #6       | choice 3 |
| #7       | choice 3 |
| #8       | choice 2 |
| #9       | choice 1 |
| #10      | choice 3 |
| #11      | choice 1 |
| #12      | choice 2 |